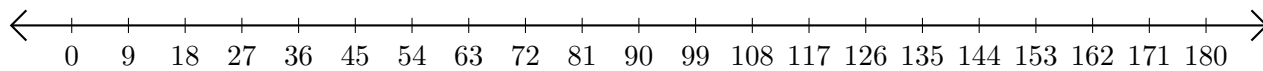


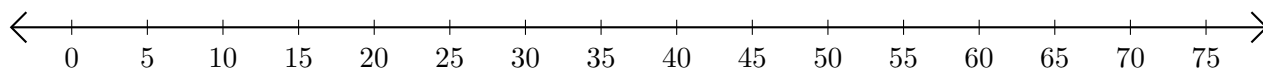
Addition de Nombres sur une Droite Graduée (B)

Utilisez la droite graduée pour calculer chaque somme.

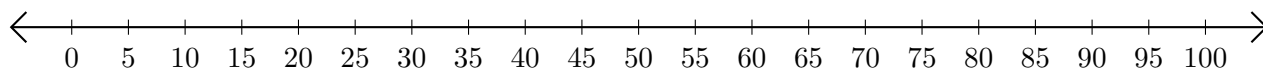
1. $54 + 108 = \underline{\hspace{2cm}}$



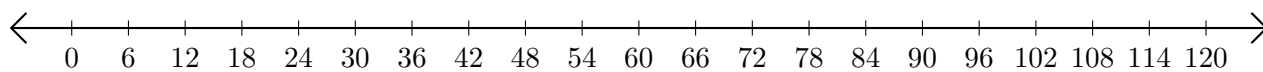
2. $40 + 5 = \underline{\hspace{2cm}}$



3. $40 + 35 = \underline{\hspace{2cm}}$



4. $42 + 6 = \underline{\hspace{2cm}}$



5. $20 + 20 = \underline{\hspace{2cm}}$

