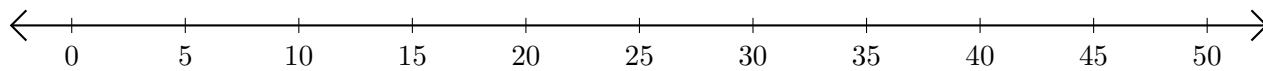


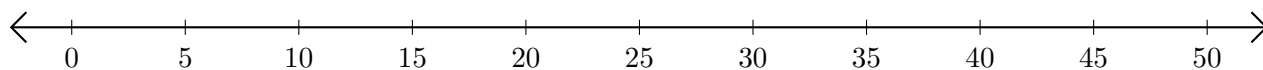
# Addition de Nombres sur une Droite Graduée (H)

Utilisez la droite graduée pour calculer chaque somme.

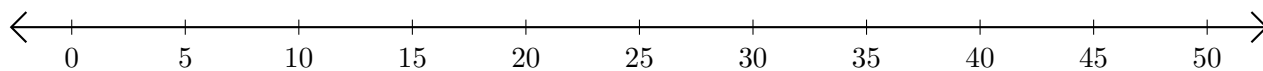
1.  $40 + 10 = \underline{\quad}$



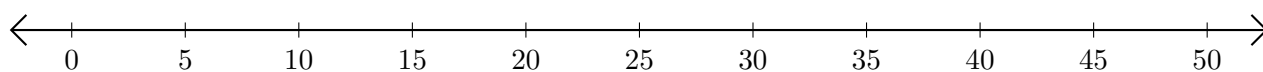
2.  $15 + 30 = \underline{\quad}$



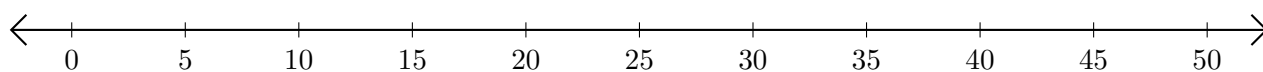
3.  $5 + 10 = \underline{\quad}$



4.  $45 + 5 = \underline{\quad}$



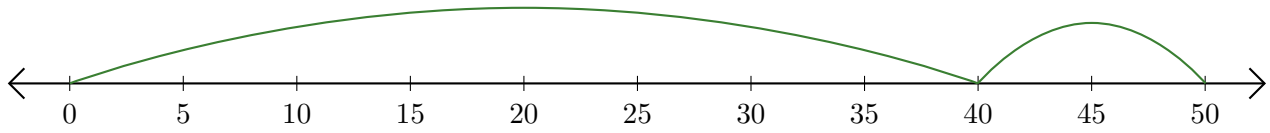
5.  $25 + 20 = \underline{\quad}$



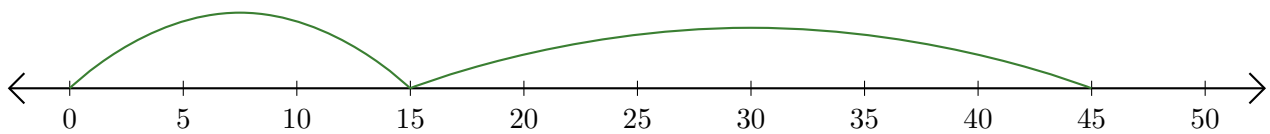
# Addition de Nombres sur une Droite Graduée (H) Réponses

Utilisez la droite graduée pour calculer chaque somme.

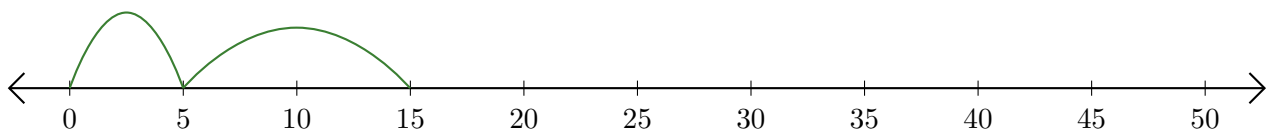
1.  $40 + 10 = \underline{50}$



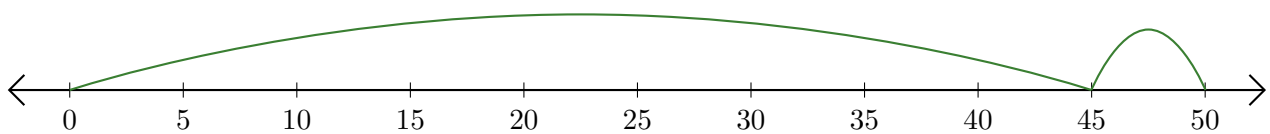
2.  $15 + 30 = \underline{45}$



3.  $5 + 10 = \underline{15}$



4.  $45 + 5 = \underline{50}$



5.  $25 + 20 = \underline{45}$

