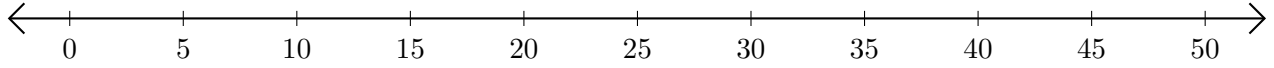


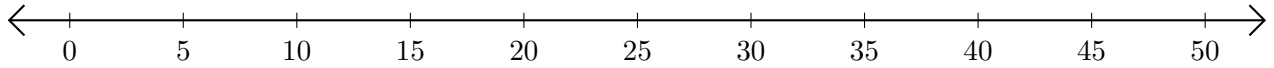
# Addition de Nombres sur une Droite Graduée (G)

Utilisez la droite graduée pour calculer chaque somme.

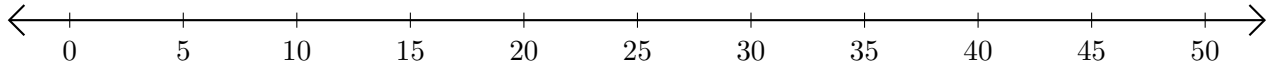
1.  $10 + 20 = \underline{\quad}$



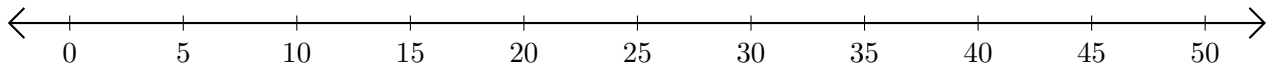
2.  $5 + 25 = \underline{\quad}$



3.  $45 + 5 = \underline{\quad}$



4.  $25 + 25 = \underline{\quad}$



5.  $35 + 15 = \underline{\quad}$

