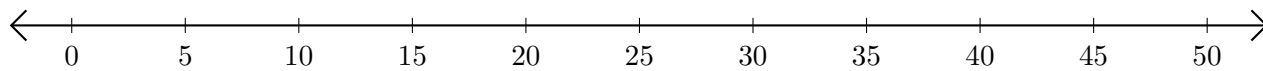


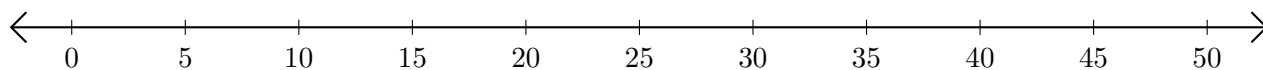
Addition de Nombres sur une Droite Graduée (F)

Utilisez la droite graduée pour calculer chaque somme.

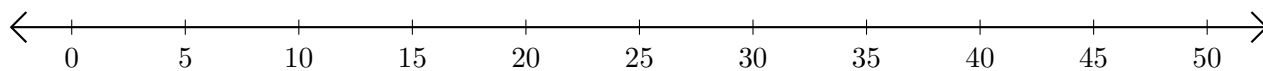
1. $40 + 5 = \underline{\quad}$



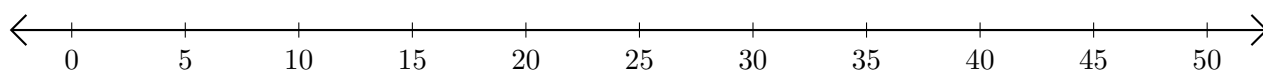
2. $25 + 10 = \underline{\quad}$



3. $45 + 5 = \underline{\quad}$



4. $10 + 40 = \underline{\quad}$



5. $15 + 30 = \underline{\quad}$

