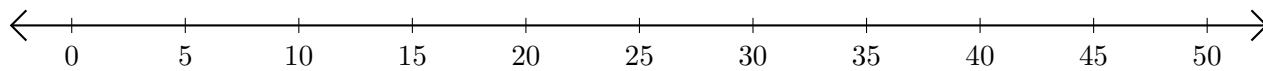


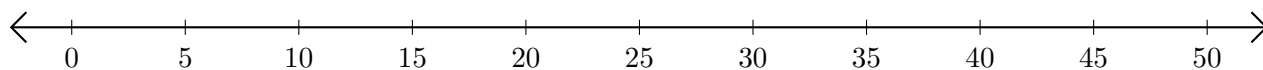
# Addition de Nombres sur une Droite Graduée (F)

Utilisez la droite graduée pour calculer chaque somme.

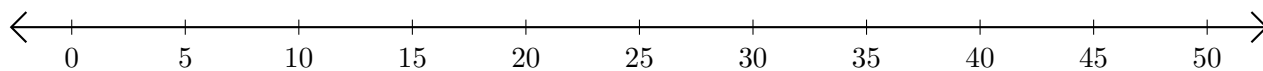
1.  $40 + 5 = \underline{\quad}$



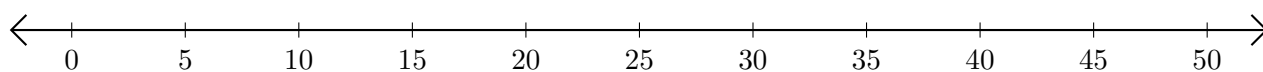
2.  $25 + 10 = \underline{\quad}$



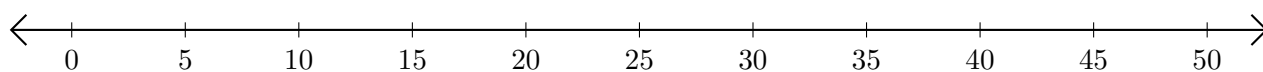
3.  $45 + 5 = \underline{\quad}$



4.  $10 + 40 = \underline{\quad}$



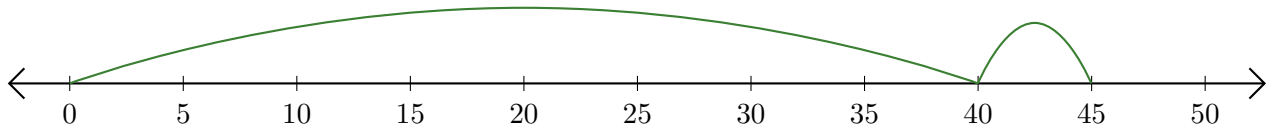
5.  $15 + 30 = \underline{\quad}$



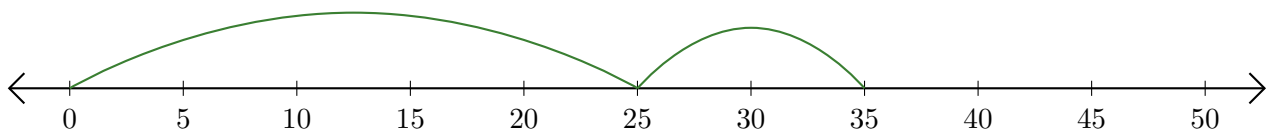
# Addition de Nombres sur une Droite Graduée (F) Réponses

Utilisez la droite graduée pour calculer chaque somme.

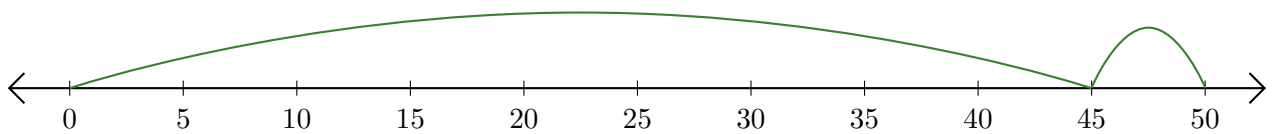
1.  $40 + 5 = \underline{45}$



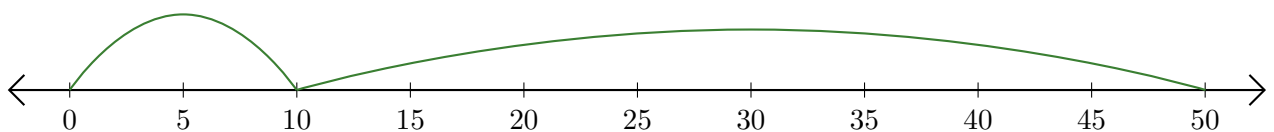
2.  $25 + 10 = \underline{35}$



3.  $45 + 5 = \underline{50}$



4.  $10 + 40 = \underline{50}$



5.  $15 + 30 = \underline{45}$

