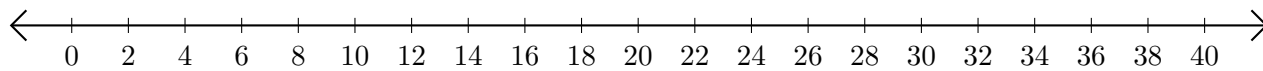


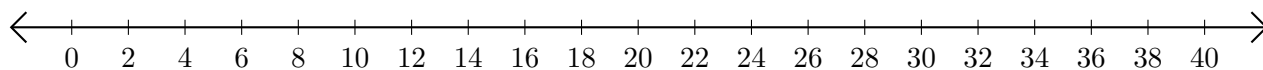
# Addition de Nombres sur une Droite Graduée (J)

Utilisez la droite graduée pour calculer chaque somme.

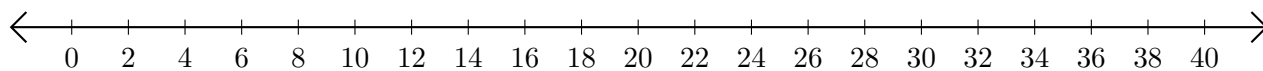
1.  $34 + 2 = \underline{\quad}$



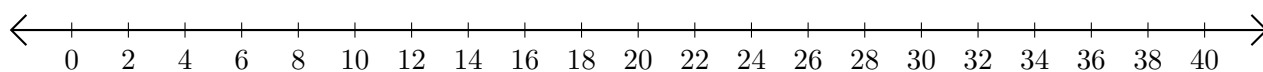
2.  $22 + 18 = \underline{\quad}$



3.  $38 + 2 = \underline{\quad}$



4.  $4 + 20 = \underline{\quad}$



5.  $14 + 20 = \underline{\quad}$

