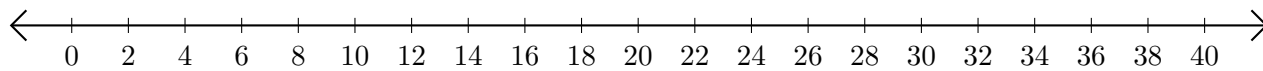


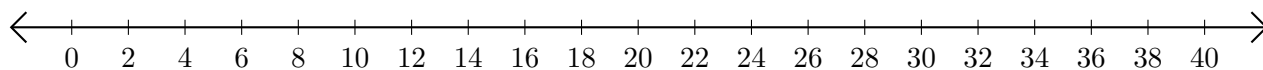
Addition de Nombres sur une Droite Graduée (H)

Utilisez la droite graduée pour calculer chaque somme.

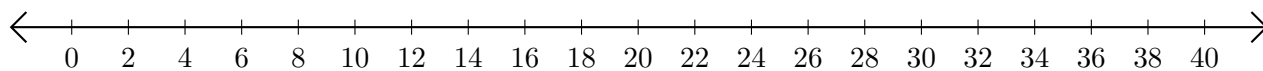
1. $36 + 4 = \underline{\quad}$



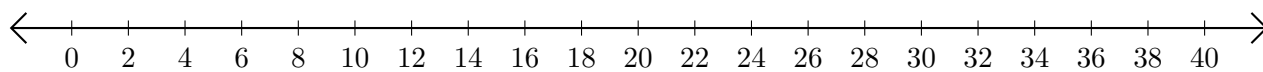
2. $14 + 22 = \underline{\quad}$



3. $26 + 14 = \underline{\quad}$



4. $30 + 2 = \underline{\quad}$



5. $22 + 2 = \underline{\quad}$

