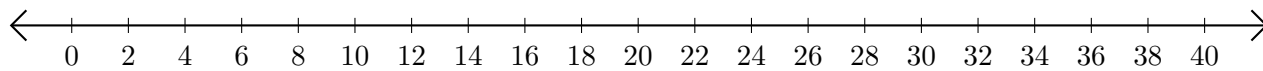


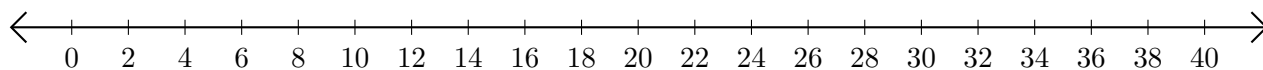
Addition de Nombres sur une Droite Graduée (D)

Utilisez la droite graduée pour calculer chaque somme.

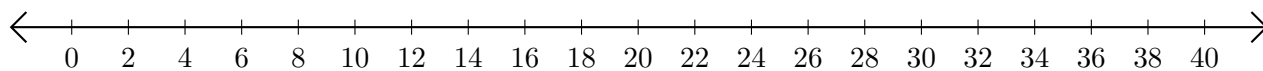
1. $12 + 2 = \underline{\quad}$



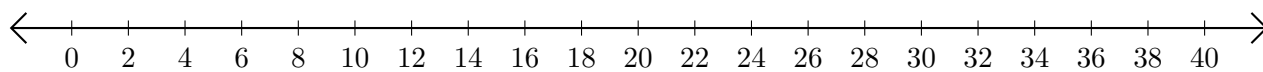
2. $26 + 4 = \underline{\quad}$



3. $14 + 16 = \underline{\quad}$



4. $34 + 2 = \underline{\quad}$



5. $24 + 8 = \underline{\quad}$

