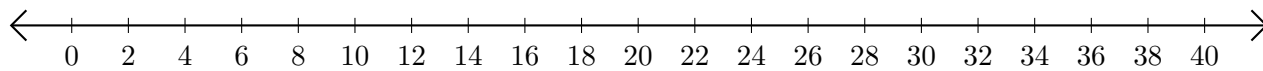


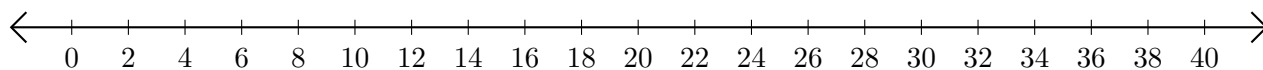
Addition de Nombres sur une Droite Graduée (A)

Utilisez la droite graduée pour calculer chaque somme.

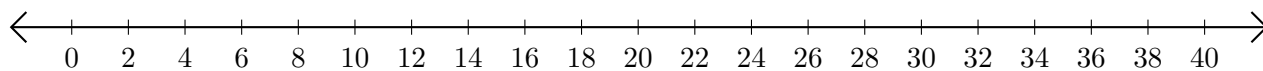
1. $24 + 14 = \underline{\quad}$



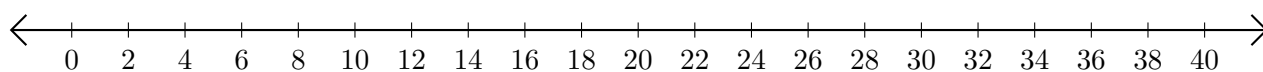
2. $22 + 18 = \underline{\quad}$



3. $26 + 6 = \underline{\quad}$



4. $14 + 12 = \underline{\quad}$



5. $10 + 30 = \underline{\quad}$

