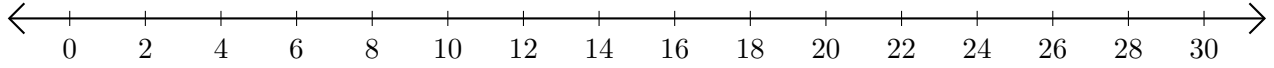


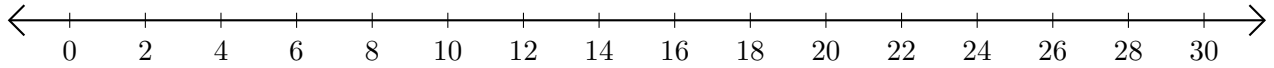
Addition de Nombres sur une Droite Graduée (I)

Utilisez la droite graduée pour calculer chaque somme.

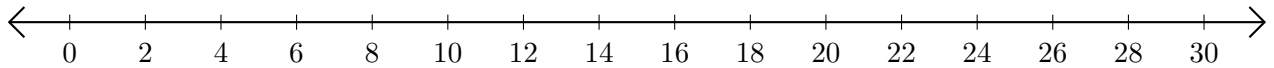
1. $16 + 10 = \underline{\quad}$



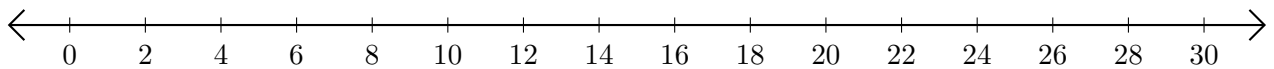
2. $6 + 8 = \underline{\quad}$



3. $14 + 14 = \underline{\quad}$



4. $4 + 10 = \underline{\quad}$



5. $10 + 18 = \underline{\quad}$

