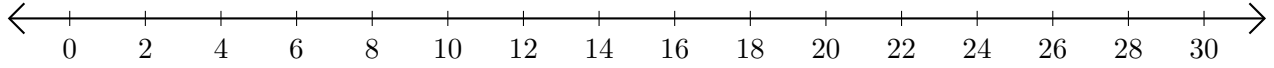


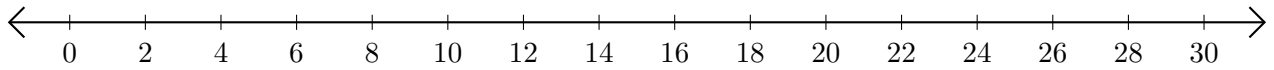
# Addition de Nombres sur une Droite Graduée (F)

Utilisez la droite graduée pour calculer chaque somme.

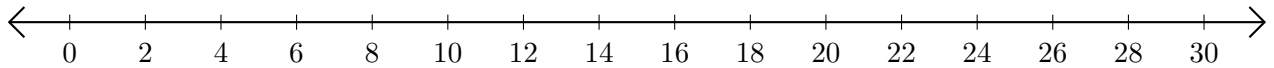
1.  $24 + 4 = \underline{\quad}$



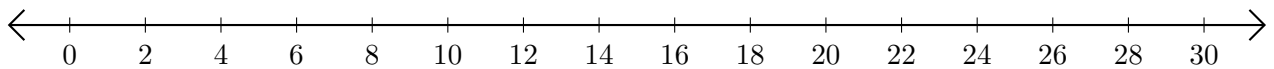
2.  $28 + 2 = \underline{\quad}$



3.  $6 + 16 = \underline{\quad}$



4.  $16 + 2 = \underline{\quad}$



5.  $22 + 4 = \underline{\quad}$

