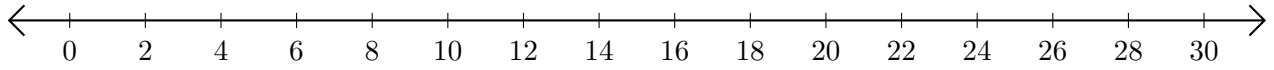


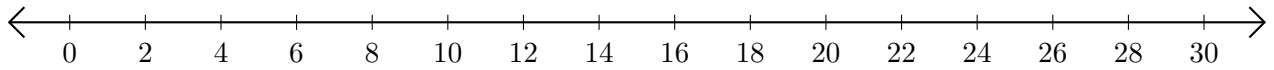
# Addition de Nombres sur une Droite Graduée (F)

Utilisez la droite graduée pour calculer chaque somme.

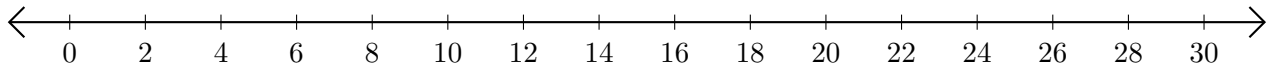
1.  $24 + 4 = \underline{\quad}$



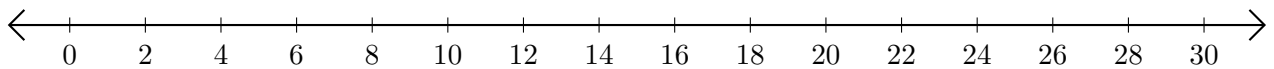
2.  $28 + 2 = \underline{\quad}$



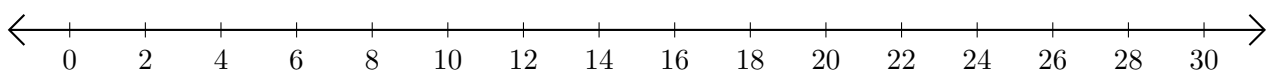
3.  $6 + 16 = \underline{\quad}$



4.  $16 + 2 = \underline{\quad}$



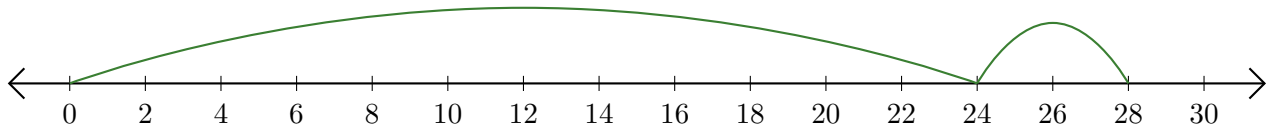
5.  $22 + 4 = \underline{\quad}$



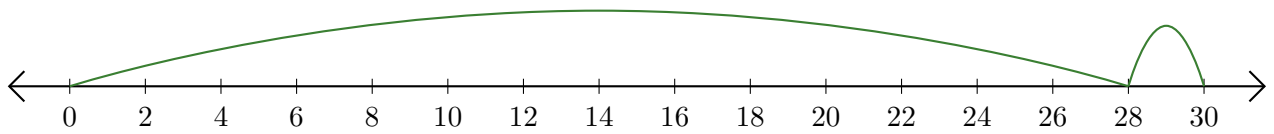
# Addition de Nombres sur une Droite Graduée (F) Réponses

Utilisez la droite graduée pour calculer chaque somme.

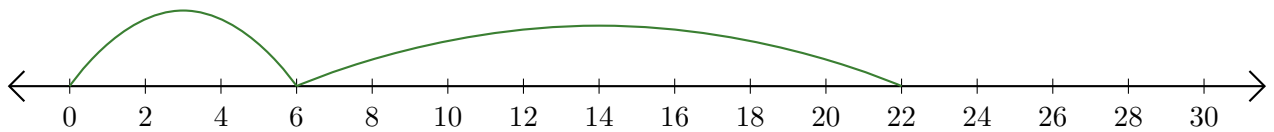
1.  $24 + 4 = \underline{28}$



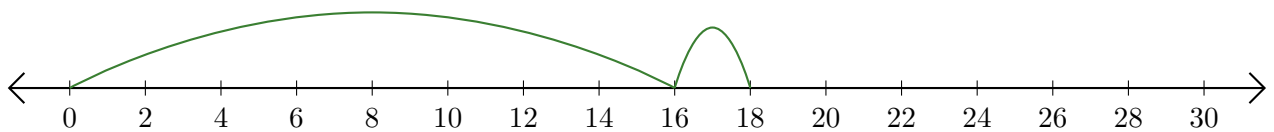
2.  $28 + 2 = \underline{30}$



3.  $6 + 16 = \underline{22}$



4.  $16 + 2 = \underline{18}$



5.  $22 + 4 = \underline{26}$

