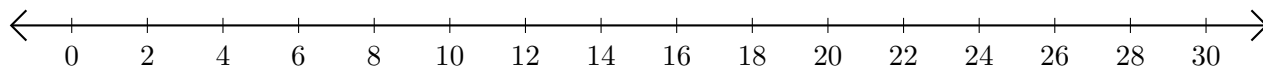


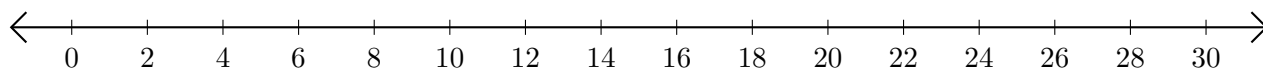
## Addition de Nombres sur une Droite Graduée (B)

Utilisez la droite graduée pour calculer chaque somme.

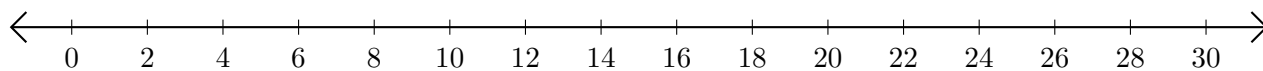
1.  $10 + 8 = \underline{\quad}$



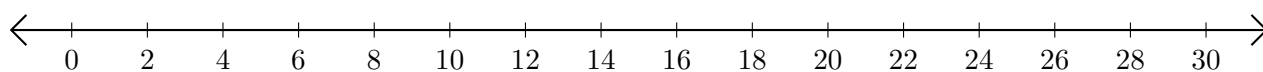
2.  $12 + 18 = \underline{\quad}$



3.  $22 + 2 = \underline{\quad}$



4.  $16 + 4 = \underline{\quad}$



5.  $26 + 2 = \underline{\quad}$

