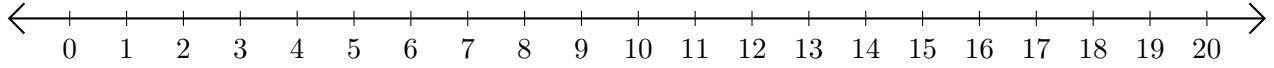


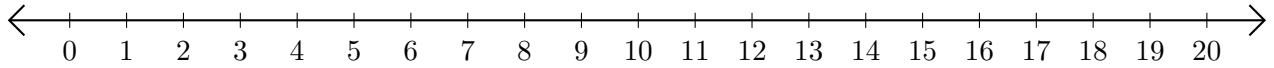
Addition de Nombres sur une Droite Graduée (E)

Utilisez la droite graduée pour calculer chaque somme.

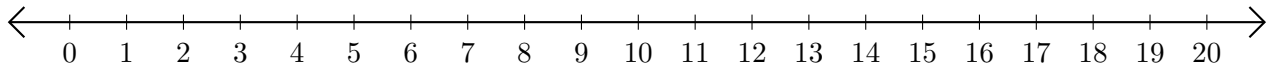
1. $5 + 10 = \underline{\quad}$



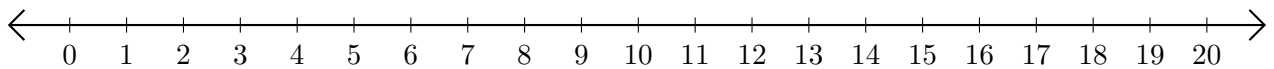
2. $3 + 2 = \underline{\quad}$



3. $12 + 1 = \underline{\quad}$



4. $13 + 3 = \underline{\quad}$



5. $15 + 3 = \underline{\quad}$

