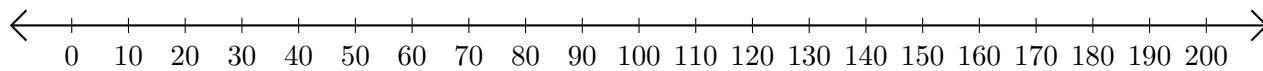


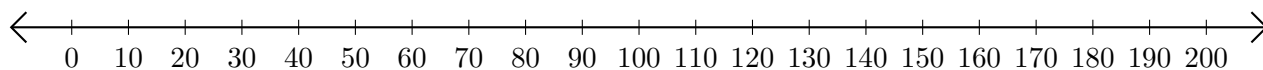
Addition de Nombres sur une Droite Graduée (C)

Utilisez la droite graduée pour calculer chaque somme.

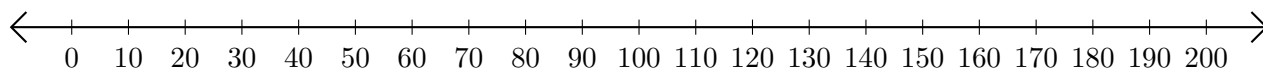
1. $80 + 10 = \underline{\quad}$



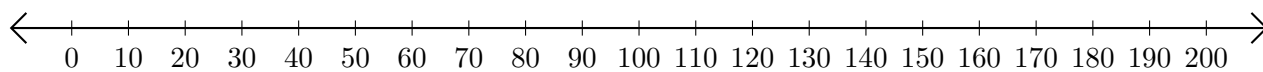
2. $130 + 30 = \underline{\quad}$



3. $150 + 20 = \underline{\quad}$



4. $30 + 170 = \underline{\quad}$



5. $100 + 60 = \underline{\quad}$

