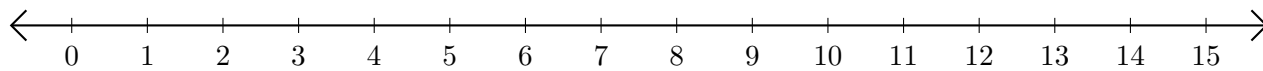


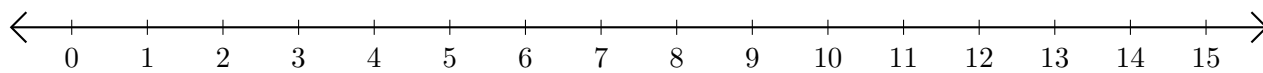
# Addition de Nombres sur une Droite Graduée (H)

Utilisez la droite graduée pour calculer chaque somme.

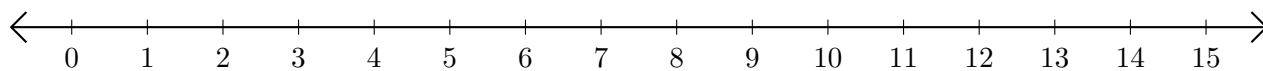
1.  $5 + 5 = \underline{\quad}$



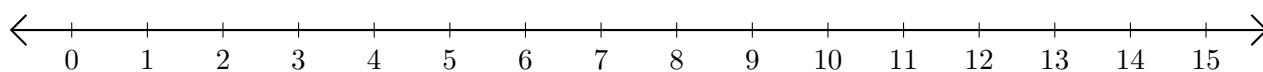
2.  $13 + 2 = \underline{\quad}$



3.  $9 + 6 = \underline{\quad}$



4.  $3 + 10 = \underline{\quad}$



5.  $14 + 1 = \underline{\quad}$

