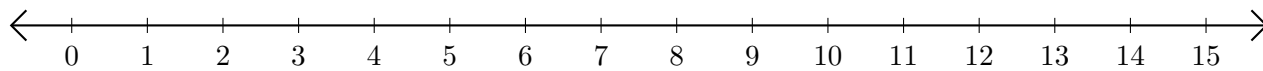


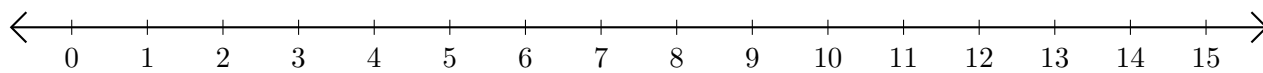
Addition de Nombres sur une Droite Graduée (H)

Utilisez la droite graduée pour calculer chaque somme.

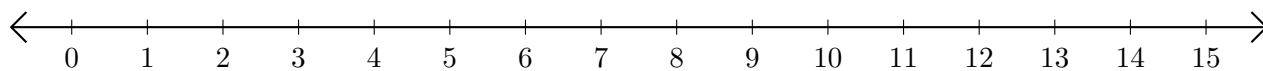
1. $5 + 5 = \underline{\quad}$



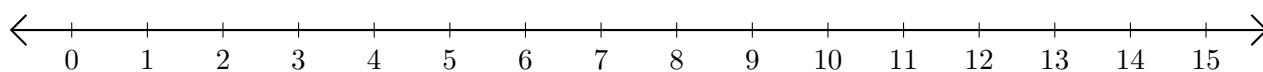
2. $13 + 2 = \underline{\quad}$



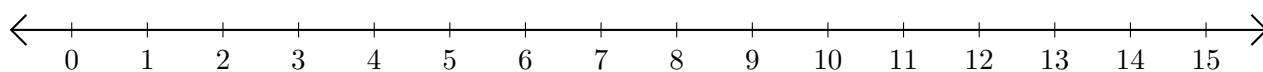
3. $9 + 6 = \underline{\quad}$



4. $3 + 10 = \underline{\quad}$



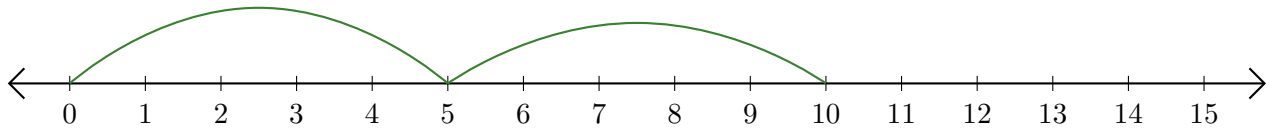
5. $14 + 1 = \underline{\quad}$



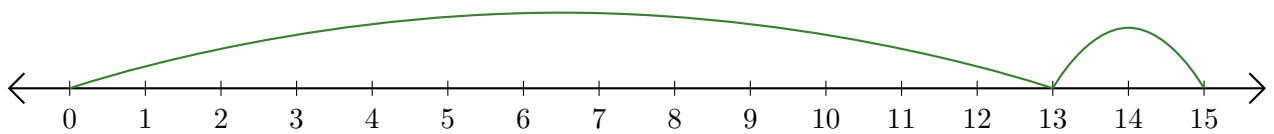
Addition de Nombres sur une Droite Graduée (H) Réponses

Utilisez la droite graduée pour calculer chaque somme.

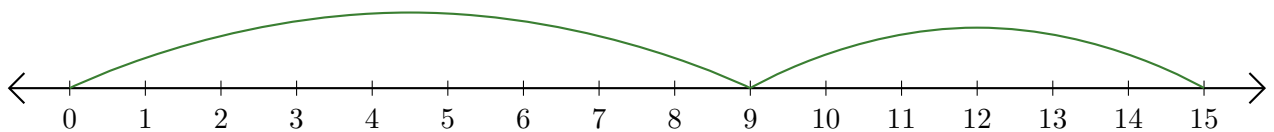
1. $5 + 5 = \underline{10}$



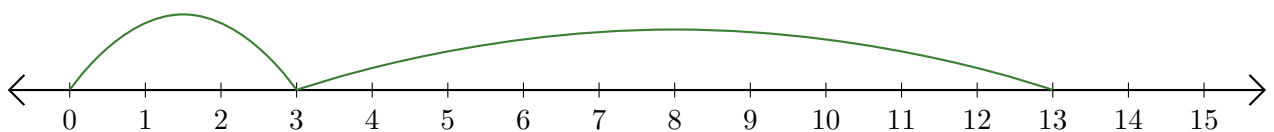
2. $13 + 2 = \underline{15}$



3. $9 + 6 = \underline{15}$



4. $3 + 10 = \underline{13}$



5. $14 + 1 = \underline{15}$

