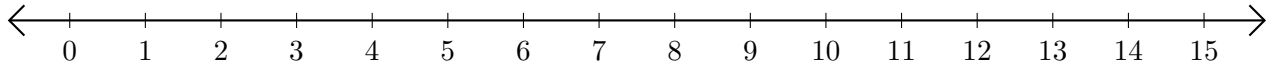


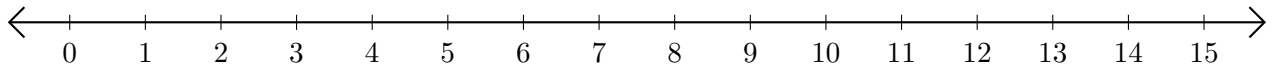
Addition de Nombres sur une Droite Graduée (G)

Utilisez la droite graduée pour calculer chaque somme.

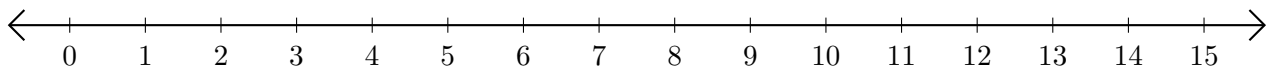
1. $13 + 1 = \underline{\quad}$



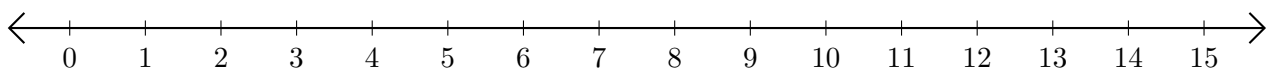
2. $8 + 3 = \underline{\quad}$



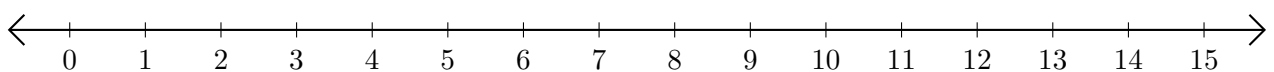
3. $3 + 10 = \underline{\quad}$



4. $1 + 5 = \underline{\quad}$



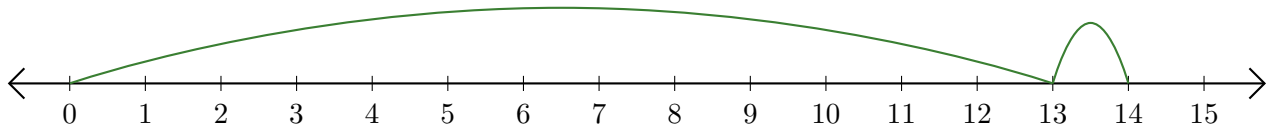
5. $10 + 5 = \underline{\quad}$



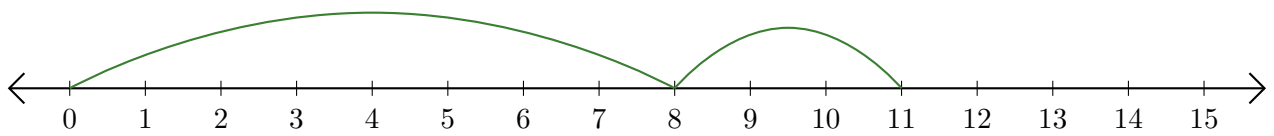
Addition de Nombres sur une Droite Graduée (G) Réponses

Utilisez la droite graduée pour calculer chaque somme.

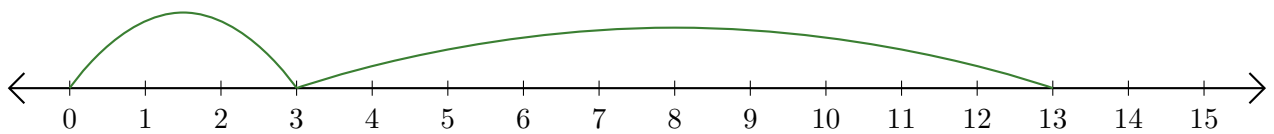
1. $13 + 1 = \underline{14}$



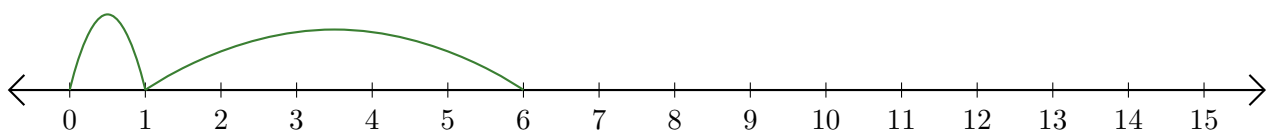
2. $8 + 3 = \underline{11}$



3. $3 + 10 = \underline{13}$



4. $1 + 5 = \underline{6}$



5. $10 + 5 = \underline{15}$

