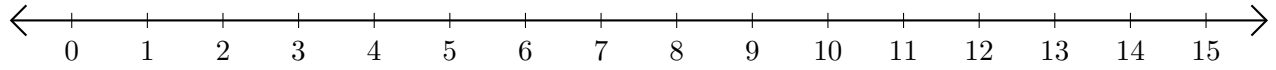


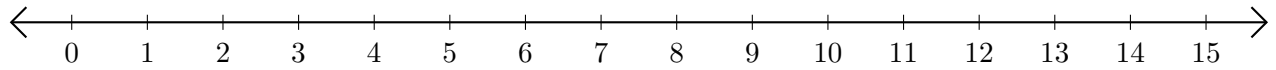
Addition de Nombres sur une Droite Graduée (F)

Utilisez la droite graduée pour calculer chaque somme.

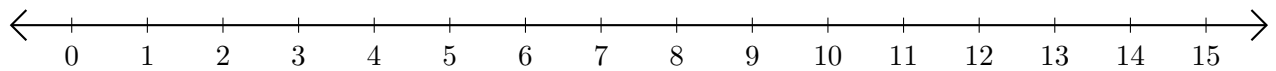
1. $12 + 1 = \underline{\quad}$



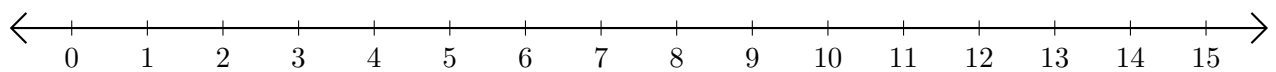
2. $4 + 9 = \underline{\quad}$



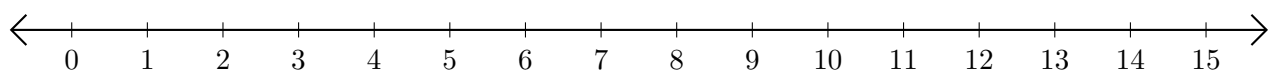
3. $3 + 9 = \underline{\quad}$



4. $5 + 5 = \underline{\quad}$



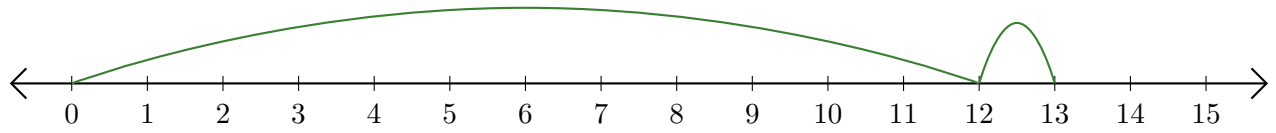
5. $7 + 5 = \underline{\quad}$



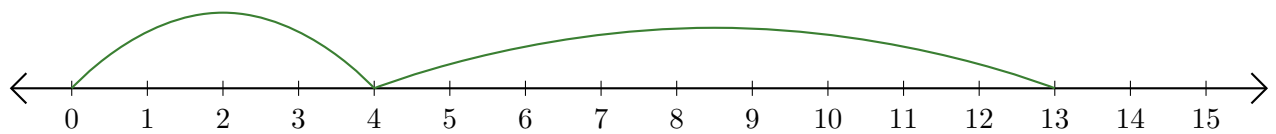
Addition de Nombres sur une Droite Graduée (F) Réponses

Utilisez la droite graduée pour calculer chaque somme.

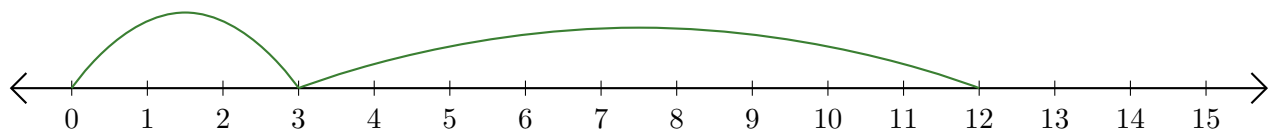
1. $12 + 1 = \underline{13}$



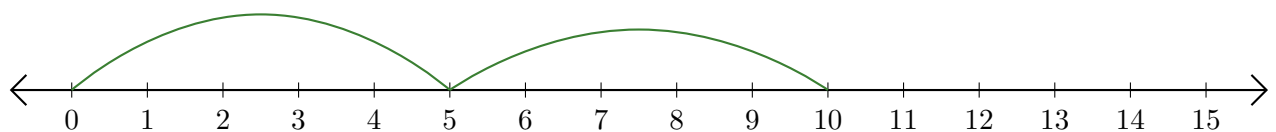
2. $4 + 9 = \underline{13}$



3. $3 + 9 = \underline{12}$



4. $5 + 5 = \underline{10}$



5. $7 + 5 = \underline{12}$

