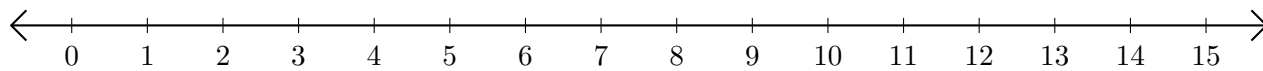


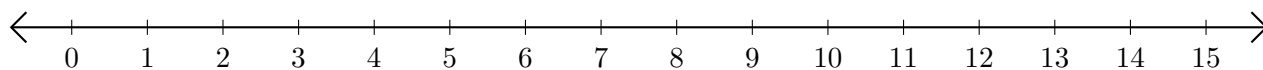
# Addition de Nombres sur une Droite Graduée (D)

Utilisez la droite graduée pour calculer chaque somme.

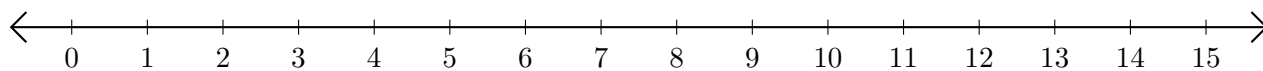
1.  $13 + 1 = \underline{\quad}$



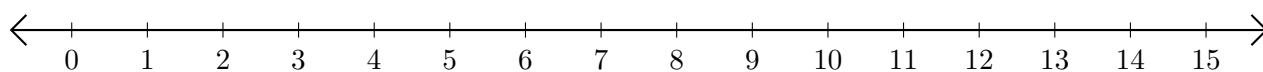
2.  $9 + 4 = \underline{\quad}$



3.  $11 + 4 = \underline{\quad}$



4.  $5 + 4 = \underline{\quad}$



5.  $14 + 1 = \underline{\quad}$

