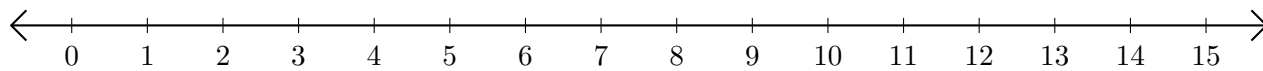


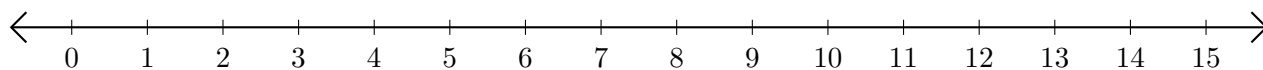
Addition de Nombres sur une Droite Graduée (D)

Utilisez la droite graduée pour calculer chaque somme.

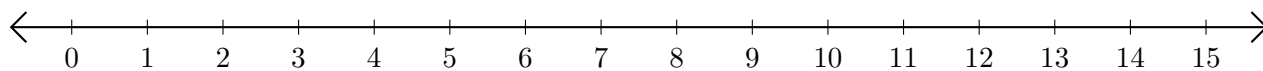
1. $13 + 1 = \underline{\quad}$



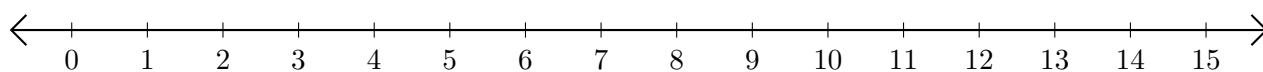
2. $9 + 4 = \underline{\quad}$



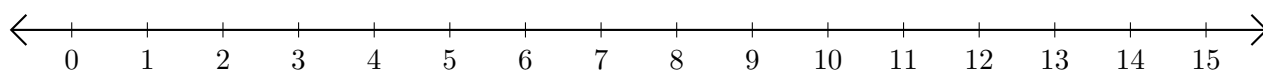
3. $11 + 4 = \underline{\quad}$



4. $5 + 4 = \underline{\quad}$



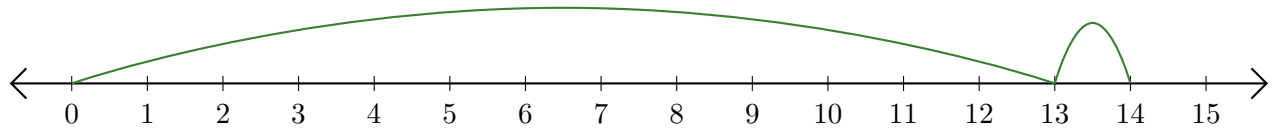
5. $14 + 1 = \underline{\quad}$



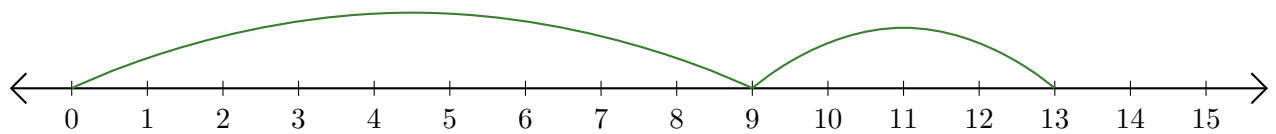
Addition de Nombres sur une Droite Graduée (D) Réponses

Utilisez la droite graduée pour calculer chaque somme.

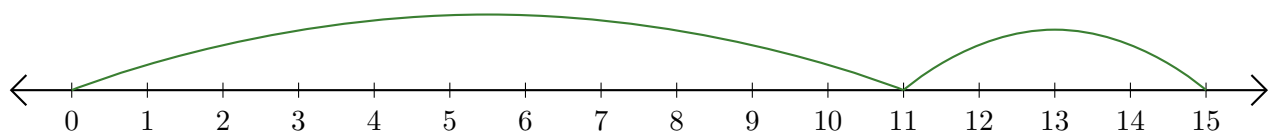
1. $13 + 1 = \underline{14}$



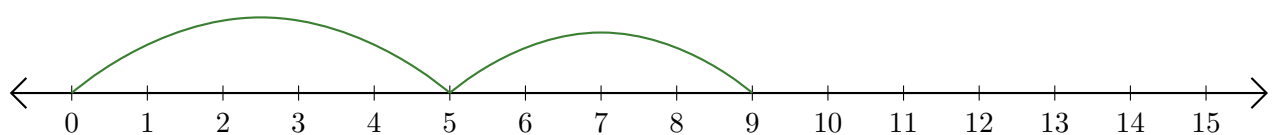
2. $9 + 4 = \underline{13}$



3. $11 + 4 = \underline{15}$



4. $5 + 4 = \underline{9}$



5. $14 + 1 = \underline{15}$

