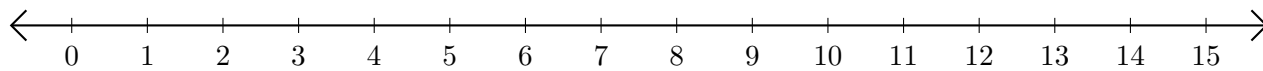


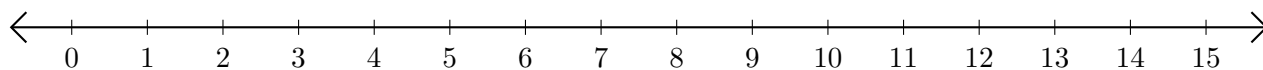
Addition de Nombres sur une Droite Graduée (B)

Utilisez la droite graduée pour calculer chaque somme.

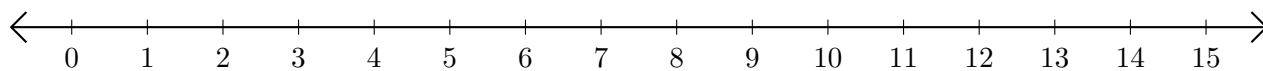
1. $10 + 2 = \underline{\quad}$



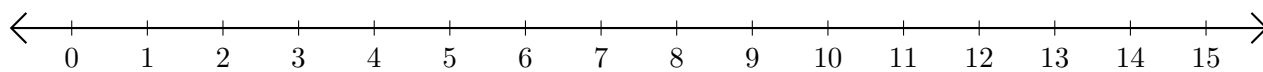
2. $7 + 1 = \underline{\quad}$



3. $9 + 6 = \underline{\quad}$



4. $4 + 8 = \underline{\quad}$



5. $11 + 3 = \underline{\quad}$

