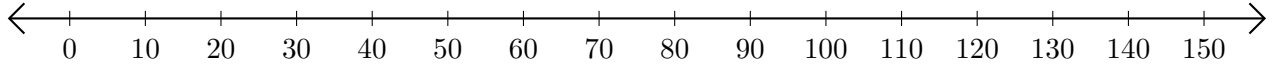


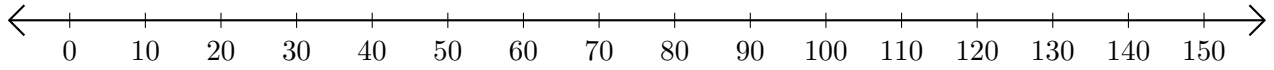
Addition de Nombres sur une Droite Graduée (I)

Utilisez la droite graduée pour calculer chaque somme.

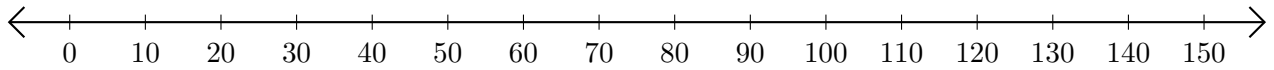
1. $30 + 20 = \underline{\hspace{2cm}}$



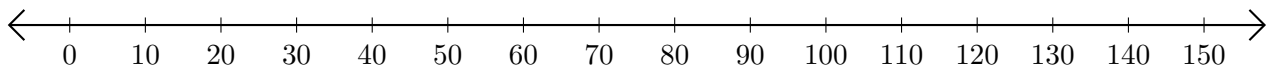
2. $10 + 140 = \underline{\hspace{2cm}}$



3. $110 + 40 = \underline{\hspace{2cm}}$



4. $40 + 60 = \underline{\hspace{2cm}}$



5. $80 + 20 = \underline{\hspace{2cm}}$

