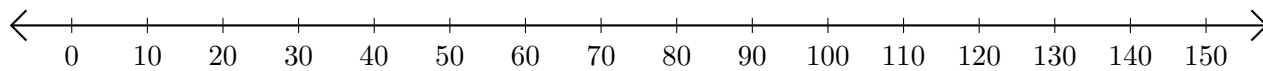


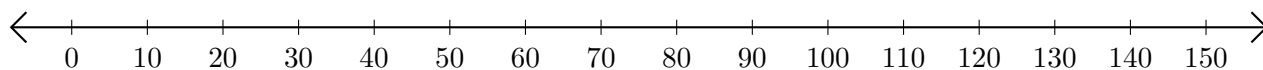
Addition de Nombres sur une Droite Graduée (H)

Utilisez la droite graduée pour calculer chaque somme.

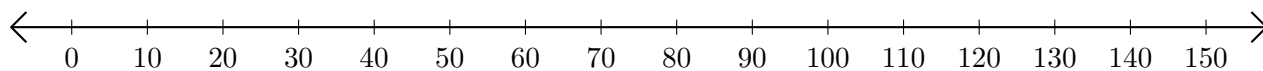
1. $130 + 10 = \underline{\hspace{2cm}}$



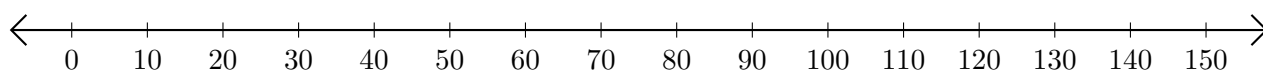
2. $70 + 50 = \underline{\hspace{2cm}}$



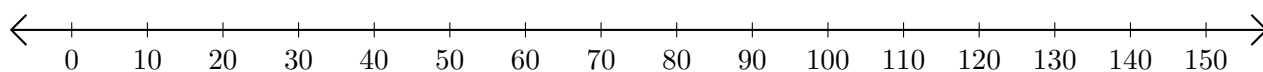
3. $120 + 10 = \underline{\hspace{2cm}}$



4. $110 + 30 = \underline{\hspace{2cm}}$



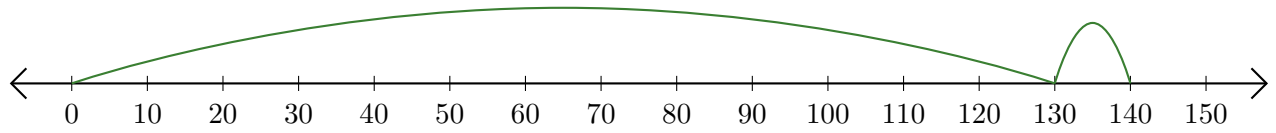
5. $30 + 40 = \underline{\hspace{2cm}}$



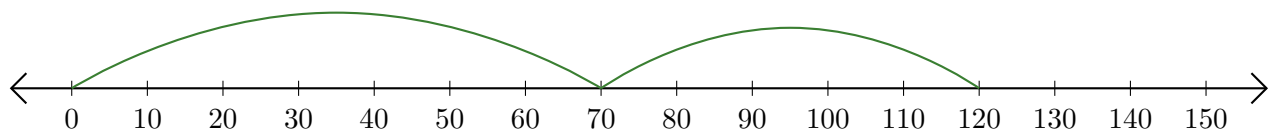
Addition de Nombres sur une Droite Graduée (H) Réponses

Utilisez la droite graduée pour calculer chaque somme.

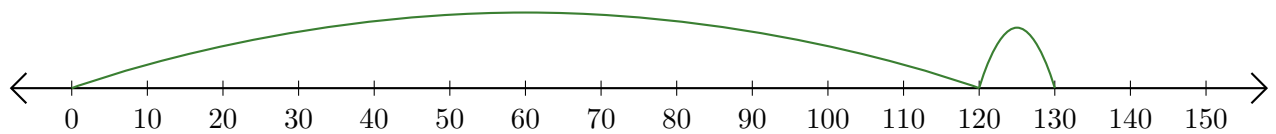
1. $130 + 10 = \underline{140}$



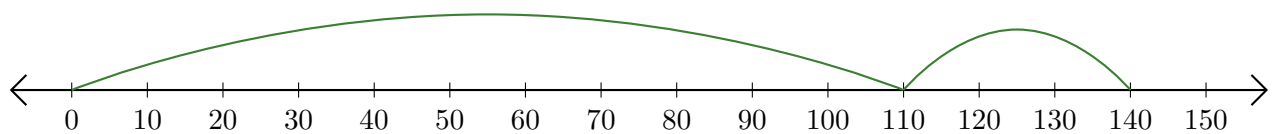
2. $70 + 50 = \underline{120}$



3. $120 + 10 = \underline{130}$



4. $110 + 30 = \underline{140}$



5. $30 + 40 = \underline{70}$

