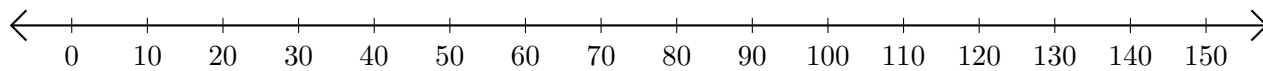


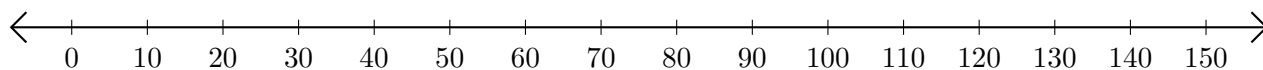
Addition de Nombres sur une Droite Graduée (D)

Utilisez la droite graduée pour calculer chaque somme.

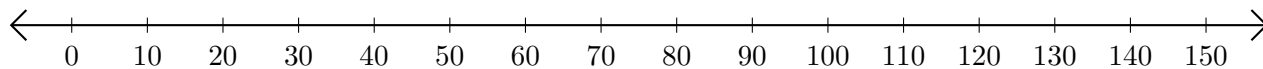
1. $100 + 50 = \underline{\hspace{2cm}}$



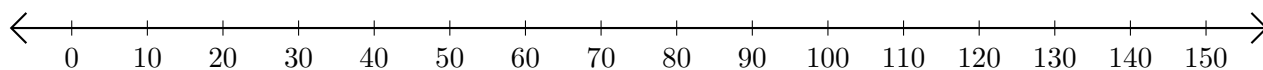
2. $130 + 20 = \underline{\hspace{2cm}}$



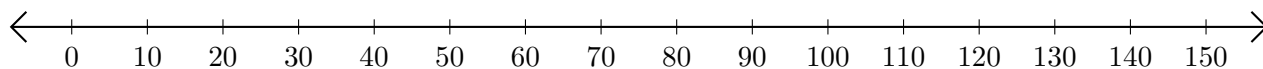
3. $50 + 20 = \underline{\hspace{2cm}}$



4. $80 + 40 = \underline{\hspace{2cm}}$



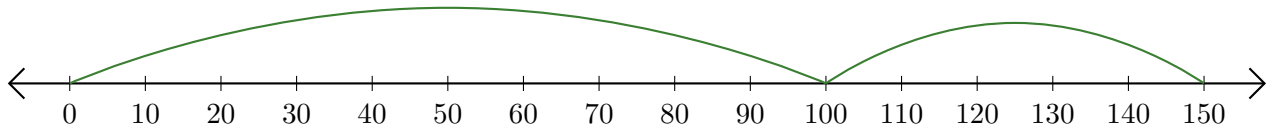
5. $90 + 60 = \underline{\hspace{2cm}}$



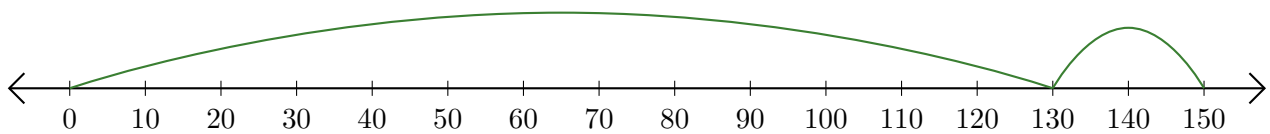
Addition de Nombres sur une Droite Graduée (D) Réponses

Utilisez la droite graduée pour calculer chaque somme.

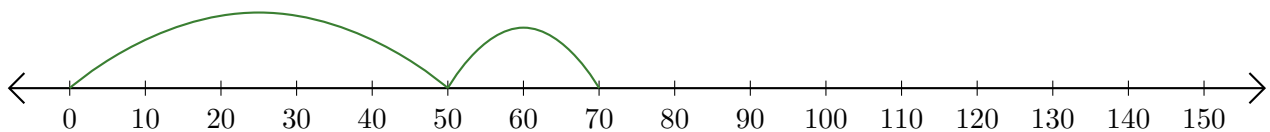
1. $100 + 50 = \underline{150}$



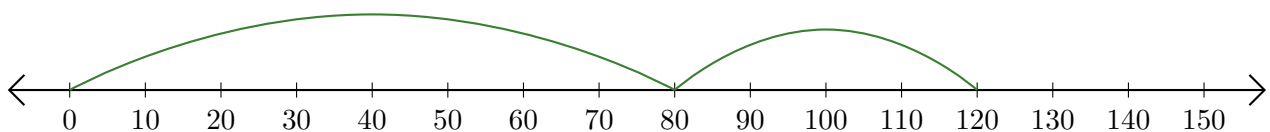
2. $130 + 20 = \underline{150}$



3. $50 + 20 = \underline{70}$



4. $80 + 40 = \underline{120}$



5. $90 + 60 = \underline{150}$

