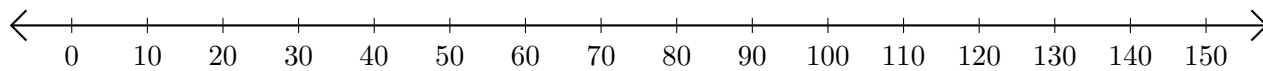


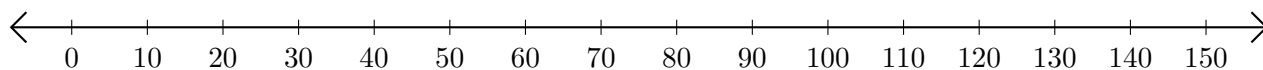
Addition de Nombres sur une Droite Graduée (B)

Utilisez la droite graduée pour calculer chaque somme.

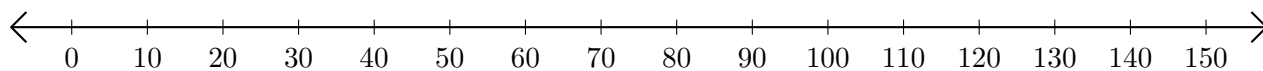
1. $50 + 50 = \underline{\hspace{2cm}}$



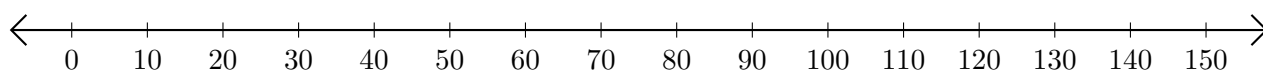
2. $40 + 30 = \underline{\hspace{2cm}}$



3. $70 + 20 = \underline{\hspace{2cm}}$



4. $60 + 70 = \underline{\hspace{2cm}}$



5. $130 + 20 = \underline{\hspace{2cm}}$

