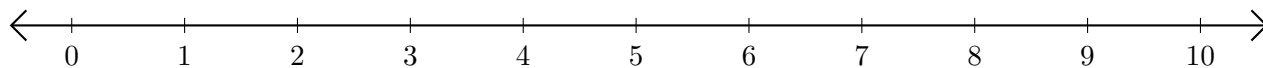


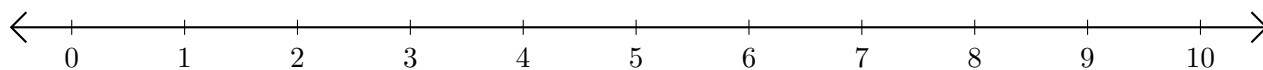
Addition de Nombres sur une Droite Graduée (J)

Utilisez la droite graduée pour calculer chaque somme.

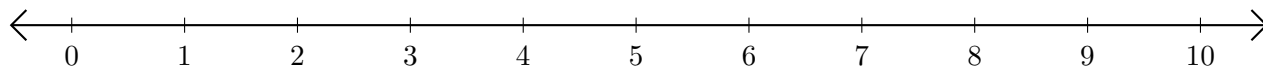
1. $5 + 3 = \underline{\quad}$



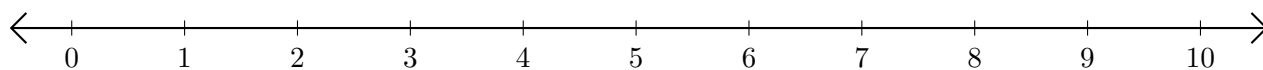
2. $9 + 1 = \underline{\quad}$



3. $2 + 7 = \underline{\quad}$



4. $7 + 3 = \underline{\quad}$



5. $4 + 1 = \underline{\quad}$

