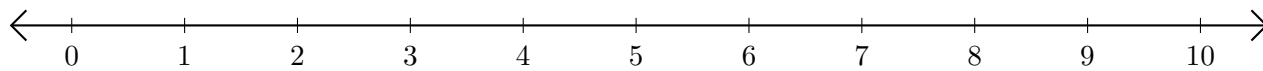


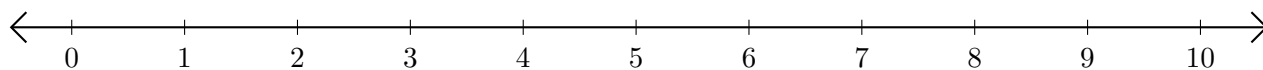
Addition de Nombres sur une Droite Graduée (D)

Utilisez la droite graduée pour calculer chaque somme.

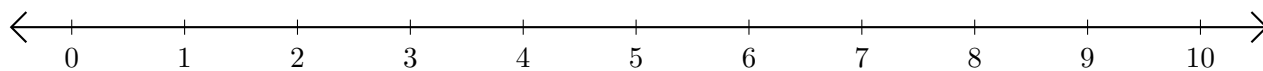
1. $5 + 2 = \underline{\quad}$



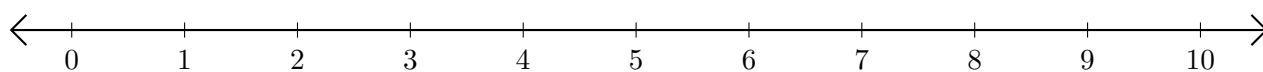
2. $2 + 5 = \underline{\quad}$



3. $8 + 1 = \underline{\quad}$



4. $6 + 4 = \underline{\quad}$



5. $1 + 6 = \underline{\quad}$

