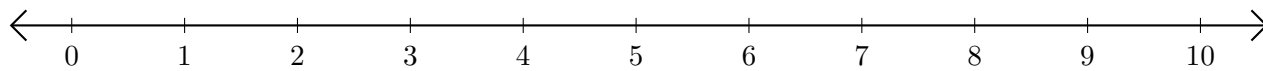


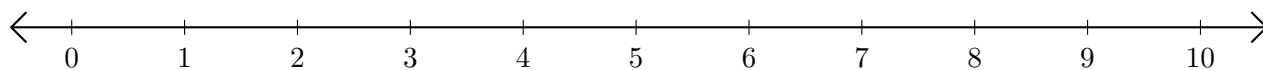
Addition de Nombres sur une Droite Graduée (B)

Utilisez la droite graduée pour calculer chaque somme.

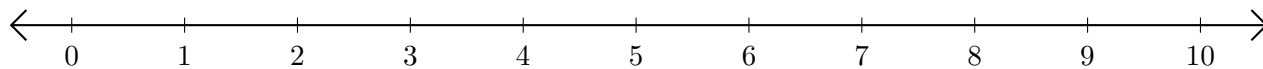
1. $3 + 6 = \underline{\quad}$



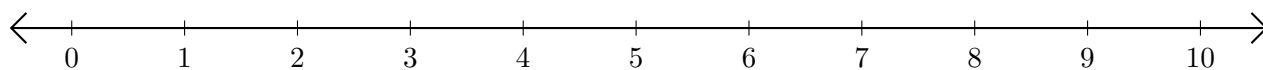
2. $5 + 4 = \underline{\quad}$



3. $4 + 4 = \underline{\quad}$



4. $1 + 7 = \underline{\quad}$



5. $9 + 1 = \underline{\quad}$

