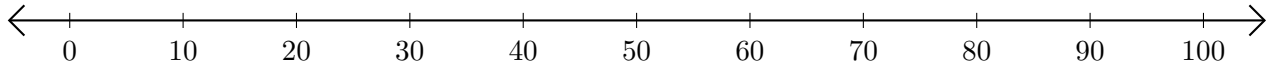


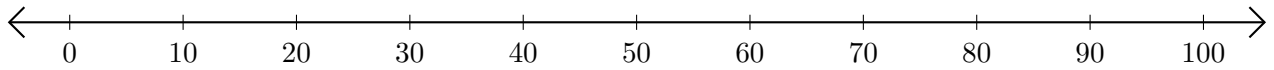
# Addition de Nombres sur une Droite Graduée (I)

Utilisez la droite graduée pour calculer chaque somme.

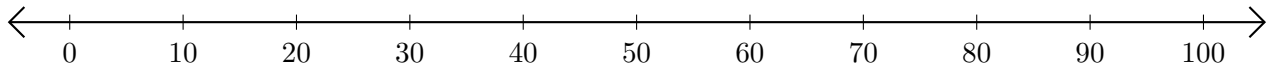
1.  $90 + 10 = \underline{\hspace{2cm}}$



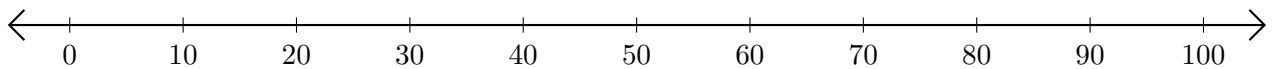
2.  $70 + 10 = \underline{\hspace{2cm}}$



3.  $30 + 60 = \underline{\hspace{2cm}}$



4.  $10 + 70 = \underline{\hspace{2cm}}$



5.  $50 + 20 = \underline{\hspace{2cm}}$

