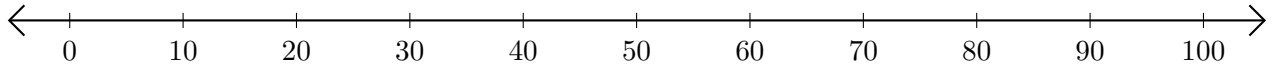


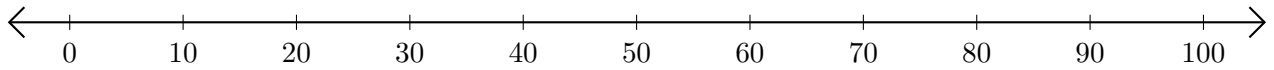
# Addition de Nombres sur une Droite Graduée (G)

Utilisez la droite graduée pour calculer chaque somme.

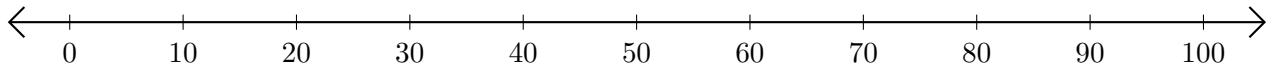
1.  $30 + 10 = \underline{\quad}$



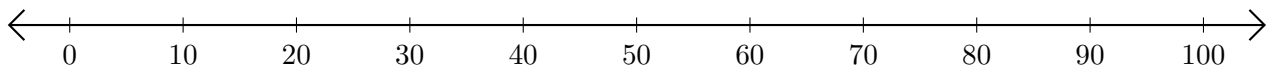
2.  $50 + 20 = \underline{\quad}$



3.  $90 + 10 = \underline{\quad}$



4.  $10 + 80 = \underline{\quad}$



5.  $20 + 80 = \underline{\quad}$

