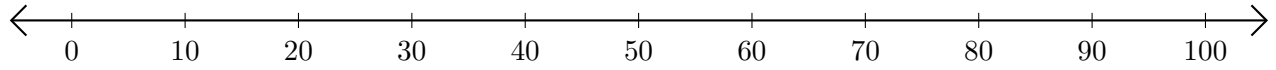


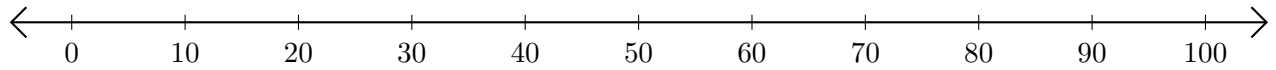
# Addition de Nombres sur une Droite Graduée (F)

Utilisez la droite graduée pour calculer chaque somme.

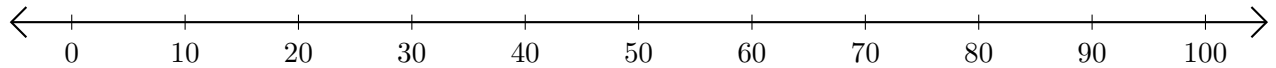
1.  $70 + 30 = \underline{\hspace{2cm}}$



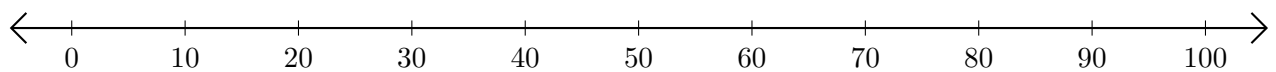
2.  $60 + 20 = \underline{\hspace{2cm}}$



3.  $40 + 50 = \underline{\hspace{2cm}}$



4.  $80 + 20 = \underline{\hspace{2cm}}$



5.  $20 + 20 = \underline{\hspace{2cm}}$

