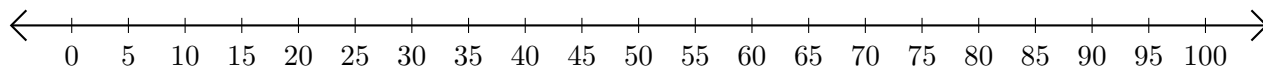


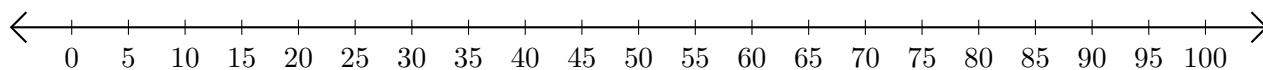
Addition de Nombres sur une Droite Graduée (J)

Utilisez la droite graduée pour calculer chaque somme.

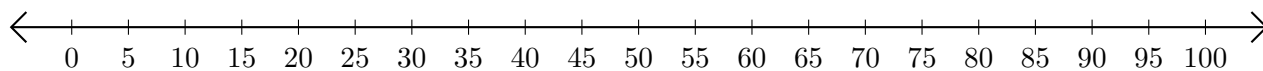
1. $35 + 50 = \underline{\hspace{2cm}}$



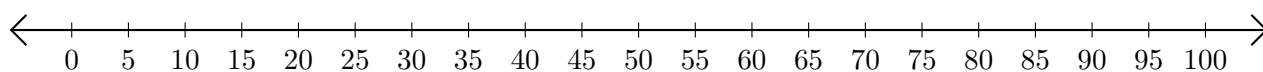
2. $55 + 15 = \underline{\hspace{2cm}}$



3. $85 + 15 = \underline{\hspace{2cm}}$



4. $80 + 15 = \underline{\hspace{2cm}}$



5. $90 + 5 = \underline{\hspace{2cm}}$

