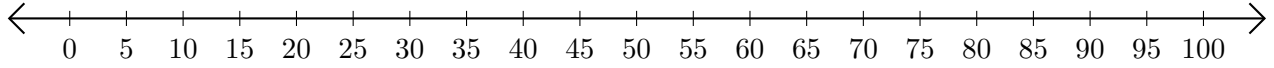


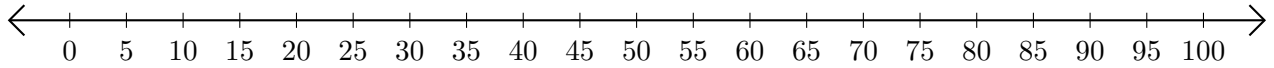
Addition de Nombres sur une Droite Graduée (I)

Utilisez la droite graduée pour calculer chaque somme.

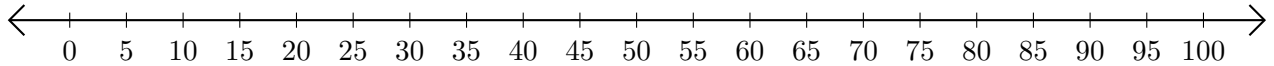
1. $60 + 5 = \underline{\quad}$



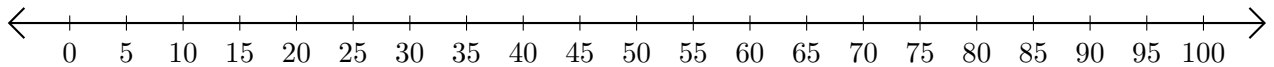
2. $50 + 30 = \underline{\quad}$



3. $5 + 40 = \underline{\quad}$



4. $85 + 10 = \underline{\quad}$



5. $80 + 5 = \underline{\quad}$

