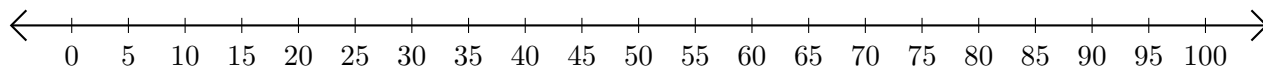


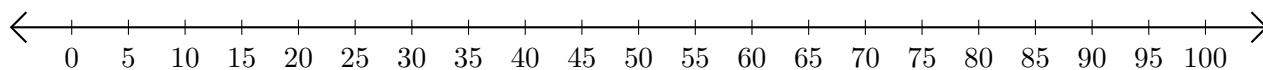
Addition de Nombres sur une Droite Graduée (H)

Utilisez la droite graduée pour calculer chaque somme.

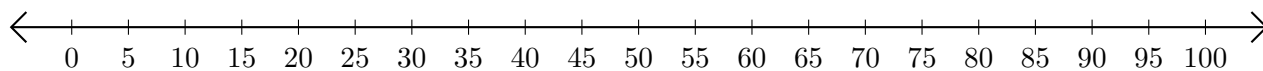
1. $95 + 5 = \underline{\hspace{2cm}}$



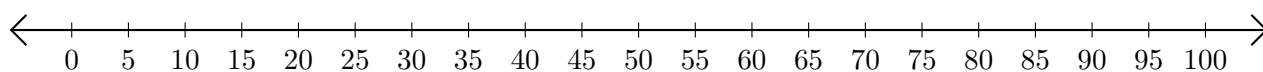
2. $85 + 10 = \underline{\hspace{2cm}}$



3. $5 + 35 = \underline{\hspace{2cm}}$



4. $75 + 15 = \underline{\hspace{2cm}}$



5. $65 + 10 = \underline{\hspace{2cm}}$

