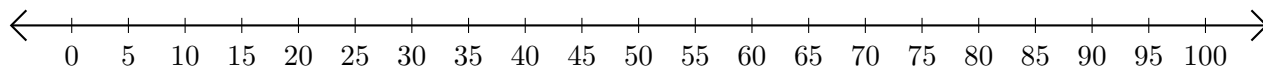


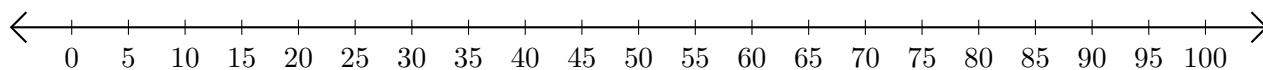
Addition de Nombres sur une Droite Graduée (F)

Utilisez la droite graduée pour calculer chaque somme.

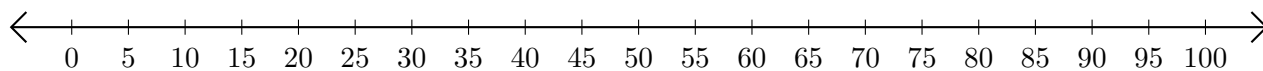
1. $20 + 50 = \underline{\quad}$



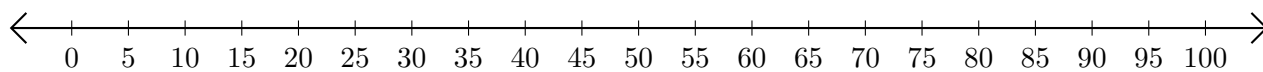
2. $15 + 65 = \underline{\quad}$



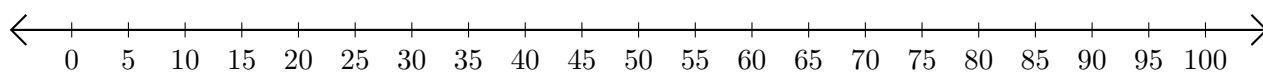
3. $50 + 45 = \underline{\quad}$



4. $80 + 20 = \underline{\quad}$



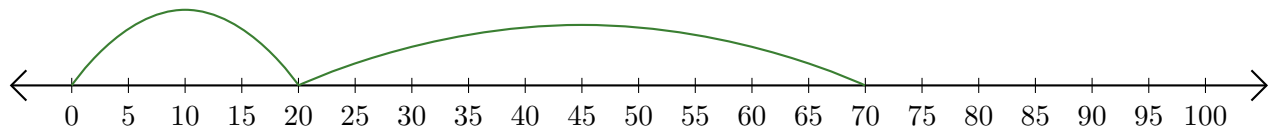
5. $45 + 20 = \underline{\quad}$



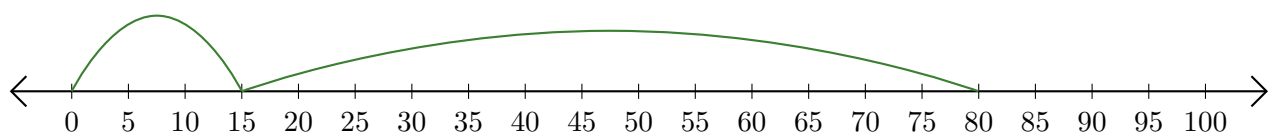
Addition de Nombres sur une Droite Graduée (F) Réponses

Utilisez la droite graduée pour calculer chaque somme.

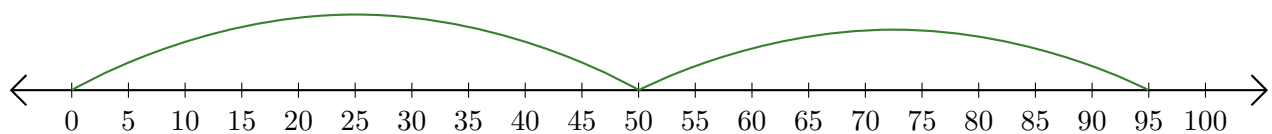
1. $20 + 50 = \underline{70}$



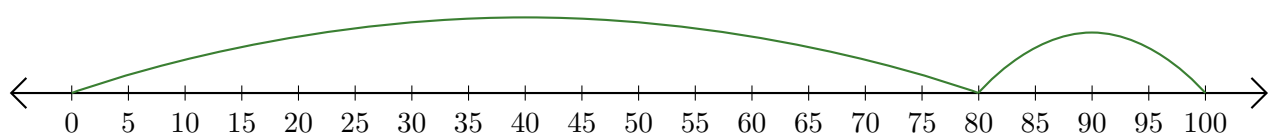
2. $15 + 65 = \underline{80}$



3. $50 + 45 = \underline{95}$



4. $80 + 20 = \underline{100}$



5. $45 + 20 = \underline{65}$

