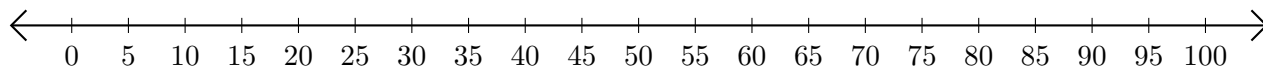


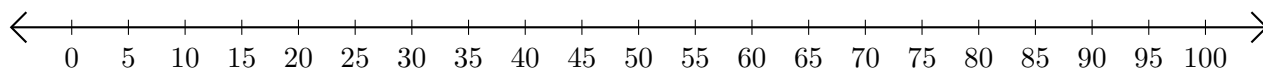
Addition de Nombres sur une Droite Graduée (D)

Utilisez la droite graduée pour calculer chaque somme.

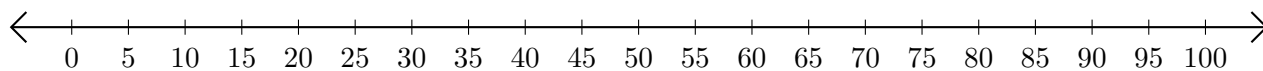
1. $55 + 5 = \underline{\hspace{2cm}}$



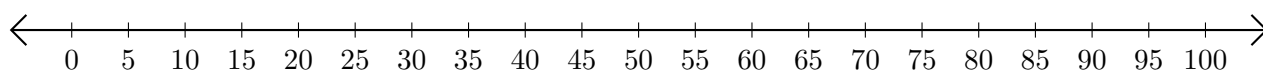
2. $75 + 25 = \underline{\hspace{2cm}}$



3. $20 + 65 = \underline{\hspace{2cm}}$



4. $85 + 10 = \underline{\hspace{2cm}}$



5. $30 + 60 = \underline{\hspace{2cm}}$

