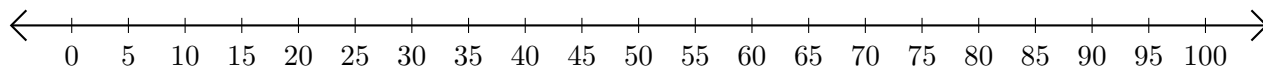


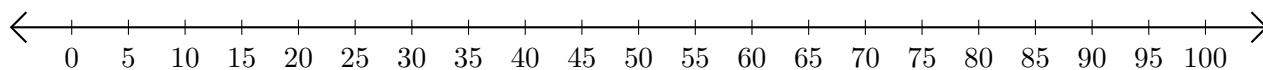
## Addition de Nombres sur une Droite Graduée (B)

Utilisez la droite graduée pour calculer chaque somme.

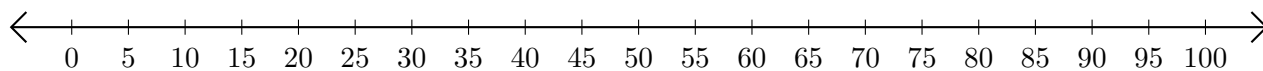
1.  $70 + 15 = \underline{\quad}$



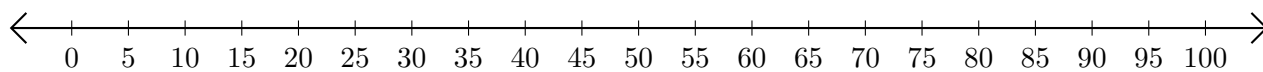
2.  $5 + 30 = \underline{\quad}$



3.  $75 + 25 = \underline{\quad}$



4.  $15 + 10 = \underline{\quad}$



5.  $10 + 5 = \underline{\quad}$

