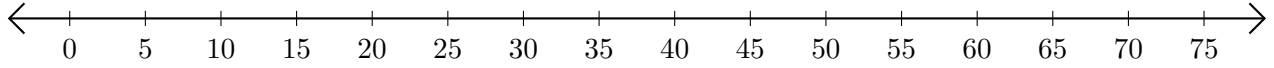


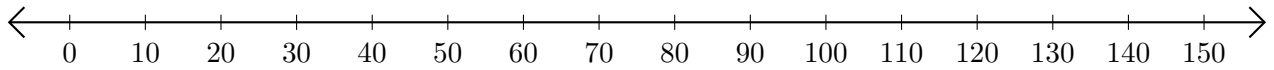
# Opérations sur Une Droite Graduée (H)

Utilisez la droite graduée pour calculer chaque somme ou différence.

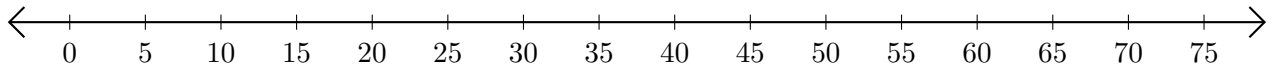
1.  $30 + 30 = \underline{\hspace{2cm}}$



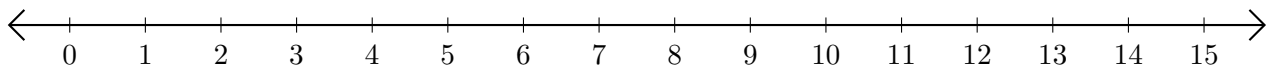
2.  $120 - 110 = \underline{\hspace{2cm}}$



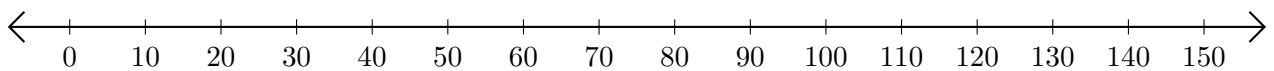
3.  $45 + 20 = \underline{\hspace{2cm}}$



4.  $10 - 2 = \underline{\hspace{2cm}}$



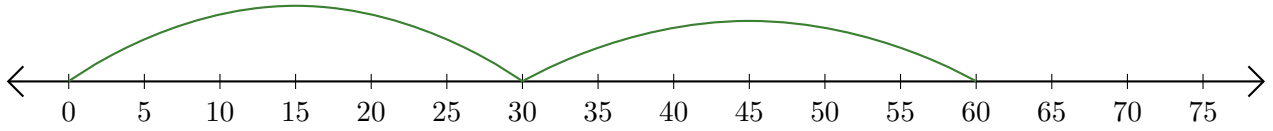
5.  $100 + 30 = \underline{\hspace{2cm}}$



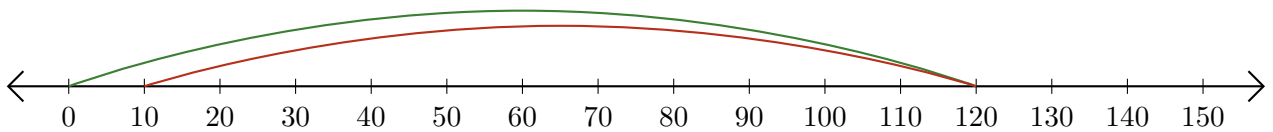
# Opérations sur Une Droite Graduée (H) Réponses

Utilisez la droite graduée pour calculer chaque somme ou différence.

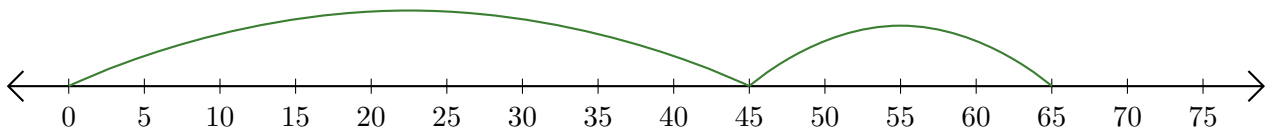
1.  $30 + 30 = \underline{60}$



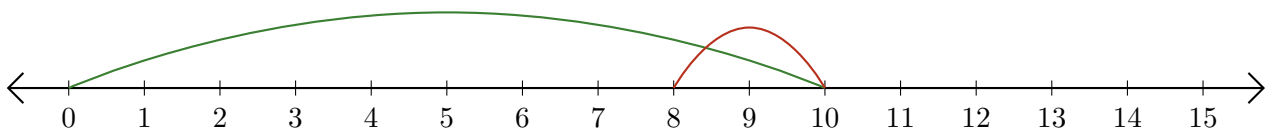
2.  $120 - 110 = \underline{10}$



3.  $45 + 20 = \underline{65}$



4.  $10 - 2 = \underline{8}$



5.  $100 + 30 = \underline{130}$

