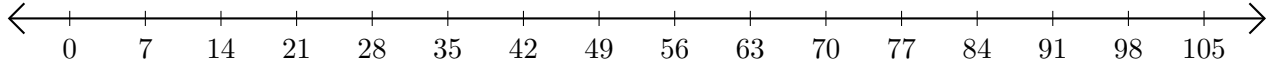


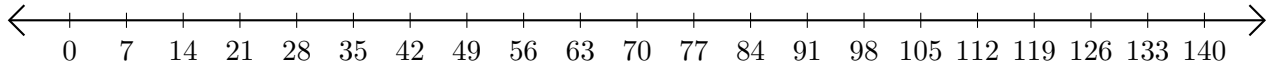
Opérations sur Une Droite Graduée (G)

Utilisez la droite graduée pour calculer chaque somme ou différence.

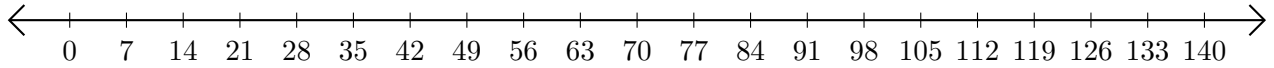
1. $98 + 7 = \underline{\hspace{2cm}}$



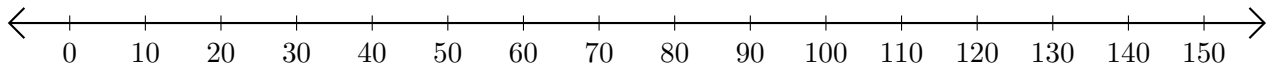
2. $91 - 35 = \underline{\hspace{2cm}}$



3. $70 + 7 = \underline{\hspace{2cm}}$



4. $120 - 60 = \underline{\hspace{2cm}}$



5. $3 + 54 = \underline{\hspace{2cm}}$

