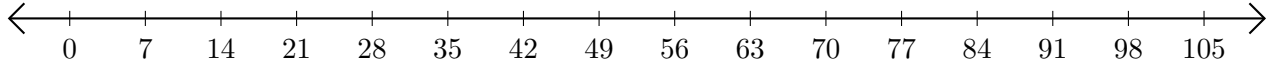


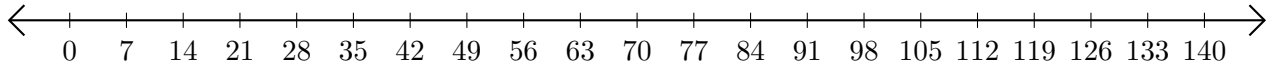
# Opérations sur Une Droite Graduée (G)

Utilisez la droite graduée pour calculer chaque somme ou différence.

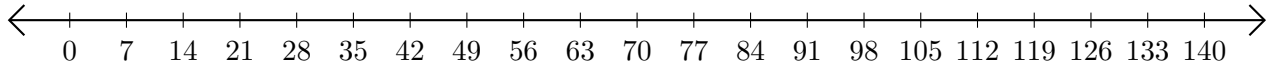
1.  $98 + 7 = \underline{\hspace{2cm}}$



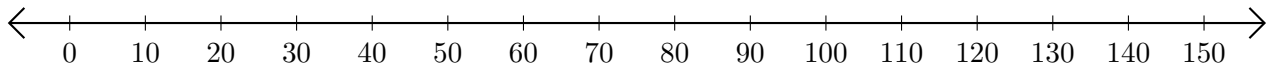
2.  $91 - 35 = \underline{\hspace{2cm}}$



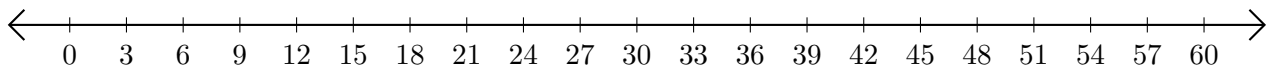
3.  $70 + 7 = \underline{\hspace{2cm}}$



4.  $120 - 60 = \underline{\hspace{2cm}}$



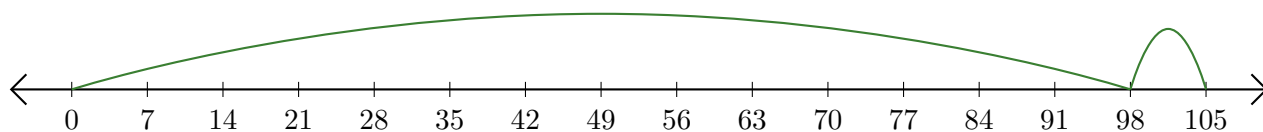
5.  $3 + 54 = \underline{\hspace{2cm}}$



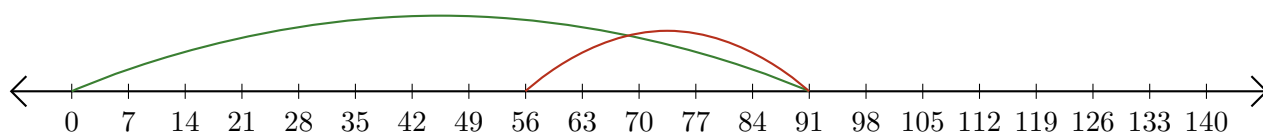
# Opérations sur Une Droite Graduée (G) Réponses

Utilisez la droite graduée pour calculer chaque somme ou différence.

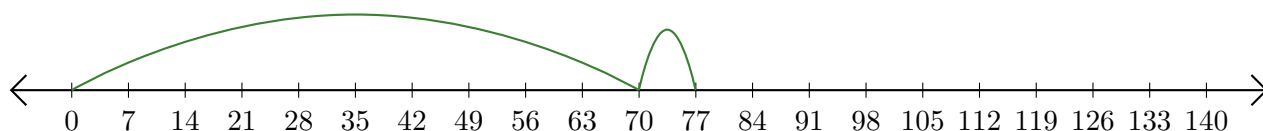
1.  $98 + 7 = \underline{105}$



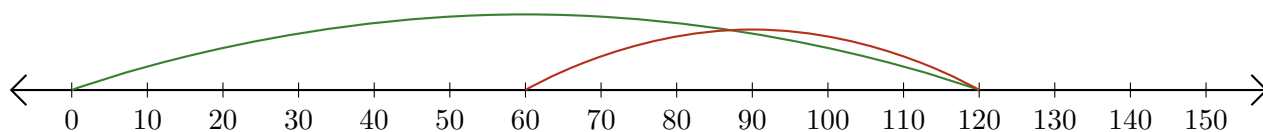
2.  $91 - 35 = \underline{56}$



3.  $70 + 7 = \underline{77}$



4.  $120 - 60 = \underline{60}$



5.  $3 + 54 = \underline{57}$

