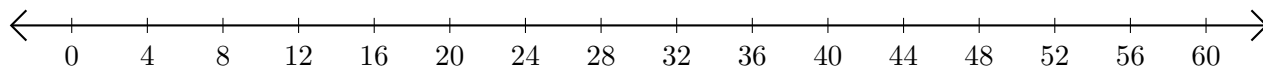


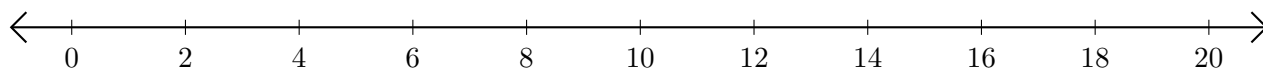
Opérations sur Une Droite Graduée (B)

Utilisez la droite graduée pour calculer chaque somme ou différence.

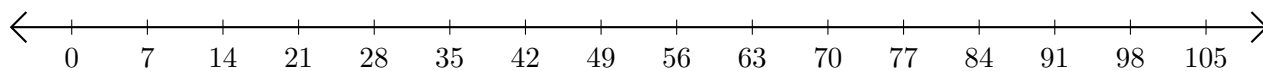
1. $32 + 20 = \underline{\quad}$



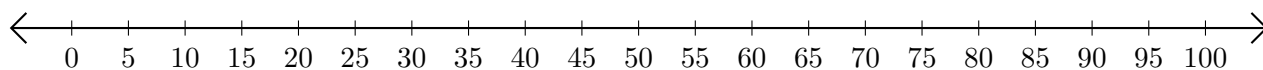
2. $20 - 18 = \underline{\quad}$



3. $14 + 7 = \underline{\quad}$



4. $95 - 10 = \underline{\quad}$



5. $90 - 10 = \underline{\quad}$

