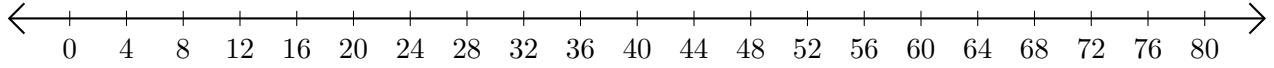


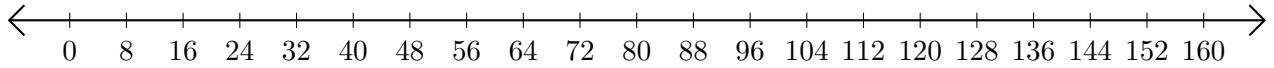
Opérations sur Une Droite Graduée (A)

Utilisez la droite graduée pour calculer chaque somme ou différence.

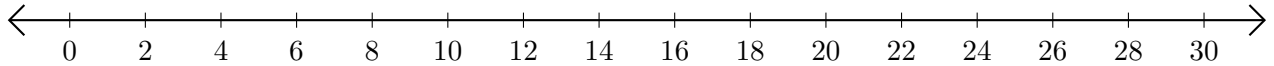
1. $68 + 4 = \underline{\hspace{2cm}}$



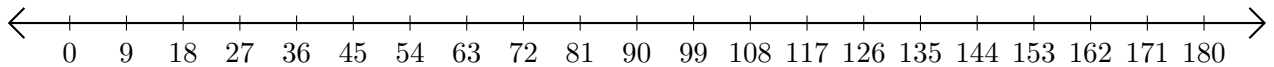
2. $80 - 48 = \underline{\hspace{2cm}}$



3. $22 + 2 = \underline{\hspace{2cm}}$



4. $153 - 99 = \underline{\hspace{2cm}}$



5. $135 - 117 = \underline{\hspace{2cm}}$

