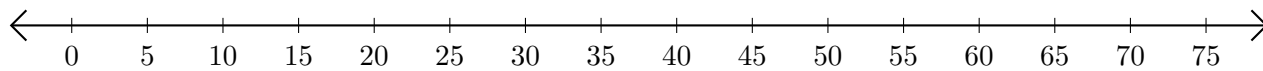


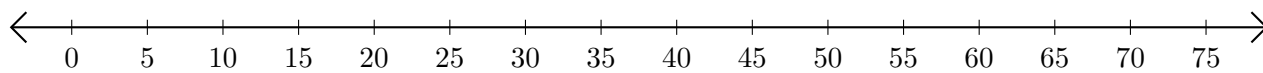
Opérations sur Une Droite Graduée (J)

Utilisez la droite graduée pour calculer chaque somme ou différence.

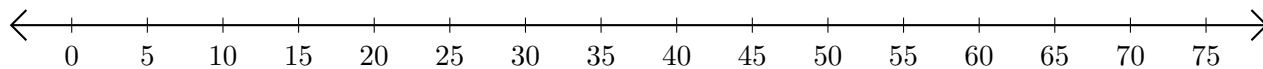
1. $55 + 20 = \underline{\hspace{2cm}}$



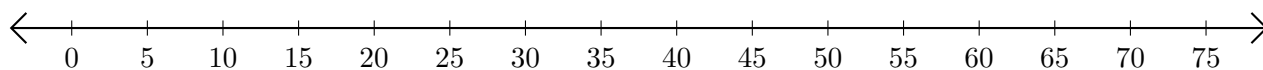
2. $65 - 40 = \underline{\hspace{2cm}}$



3. $70 + 5 = \underline{\hspace{2cm}}$



4. $55 - 35 = \underline{\hspace{2cm}}$



5. $15 + 5 = \underline{\hspace{2cm}}$

