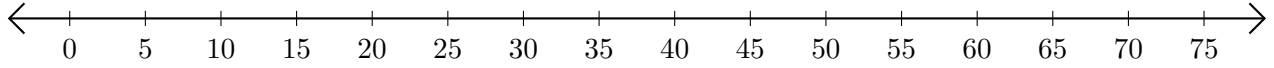


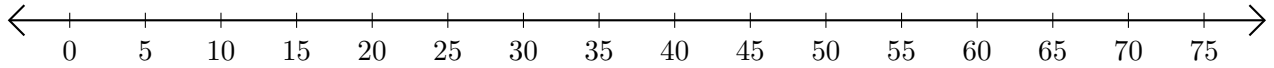
# Opérations sur Une Droite Graduée (I)

Utilisez la droite graduée pour calculer chaque somme ou différence.

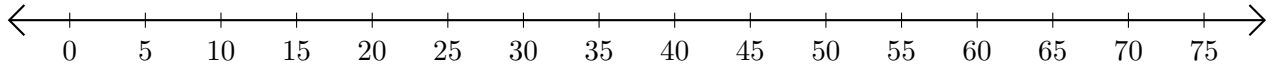
1.  $55 + 15 = \underline{\quad}$



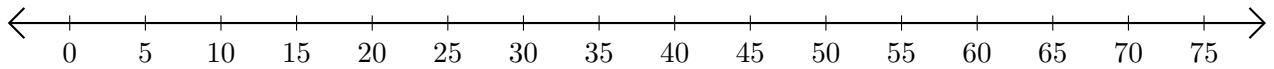
2.  $60 - 50 = \underline{\quad}$



3.  $65 + 5 = \underline{\quad}$



4.  $50 - 35 = \underline{\quad}$



5.  $70 + 5 = \underline{\quad}$

