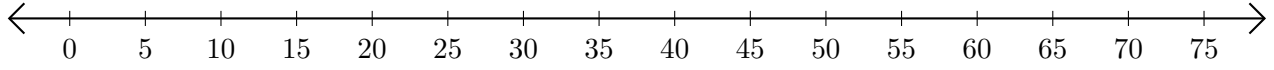


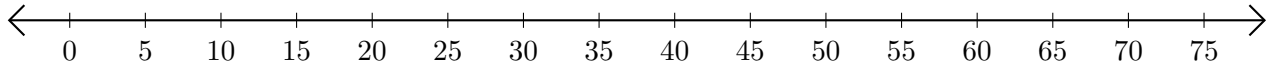
# Opérations sur Une Droite Graduée (E)

Utilisez la droite graduée pour calculer chaque somme ou différence.

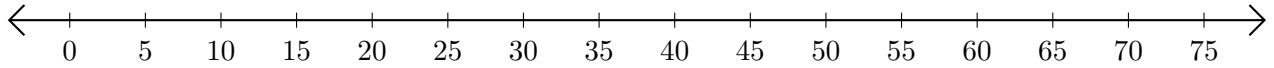
1.  $15 + 60 = \underline{\quad}$



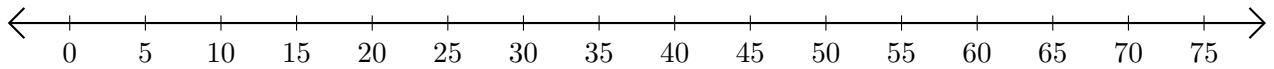
2.  $35 - 25 = \underline{\quad}$



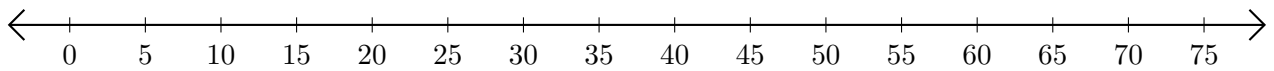
3.  $70 + 5 = \underline{\quad}$



4.  $70 - 5 = \underline{\quad}$



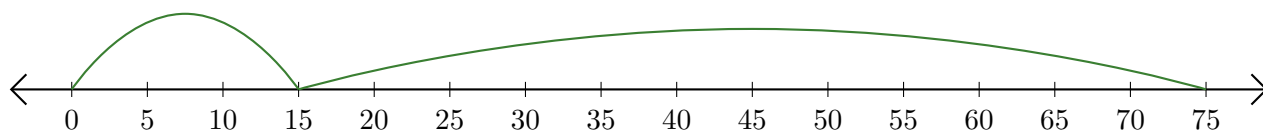
5.  $75 - 30 = \underline{\quad}$



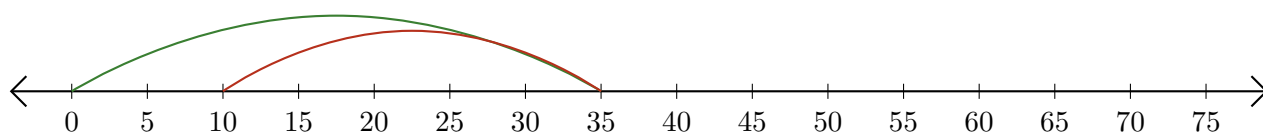
# Opérations sur Une Droite Graduée (E) Réponses

Utilisez la droite graduée pour calculer chaque somme ou différence.

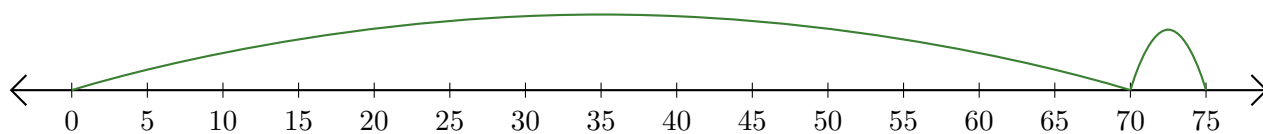
1.  $15 + 60 = \underline{75}$



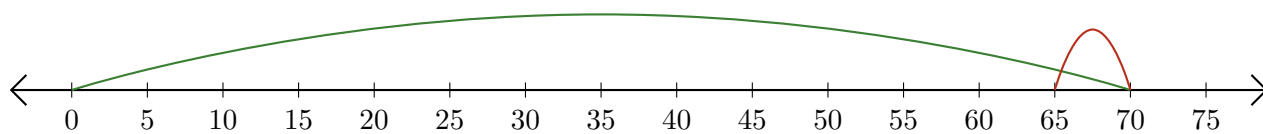
2.  $35 - 25 = \underline{10}$



3.  $70 + 5 = \underline{75}$



4.  $70 - 5 = \underline{65}$



5.  $75 - 30 = \underline{45}$

