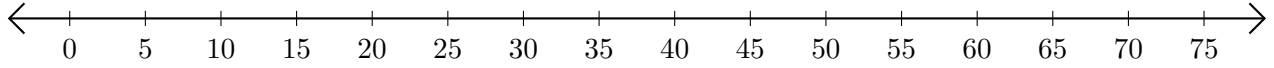


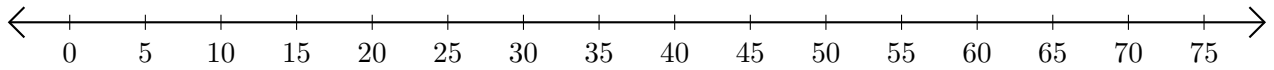
Opérations sur Une Droite Graduée (C)

Utilisez la droite graduée pour calculer chaque somme ou différence.

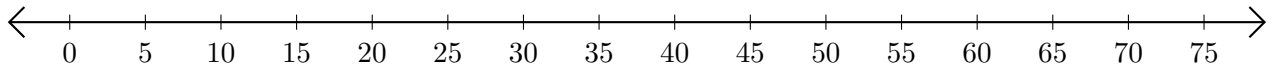
1. $25 + 5 = \underline{\quad}$



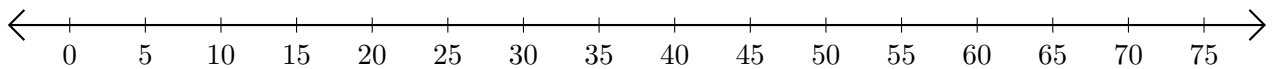
2. $60 - 45 = \underline{\quad}$



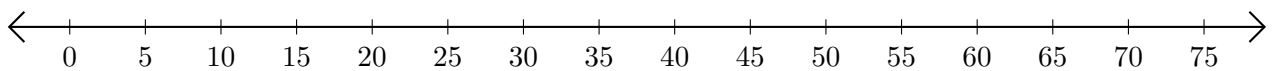
3. $50 + 15 = \underline{\quad}$



4. $35 - 10 = \underline{\quad}$




5. $55 + 10 = \underline{\quad}$



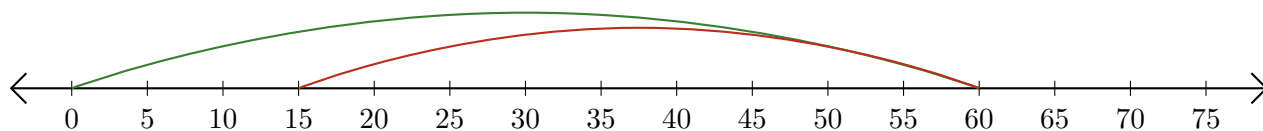
Opérations sur Une Droite Graduée (C) Réponses

Utilisez la droite graduée pour calculer chaque somme ou différence.

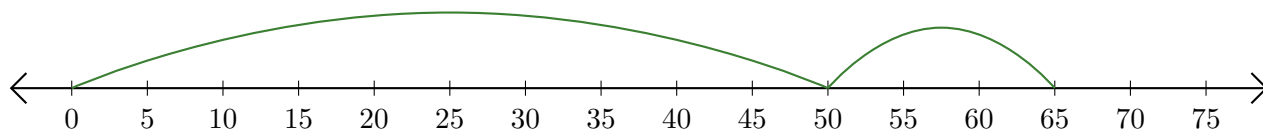
1. $25 + 5 = \underline{30}$



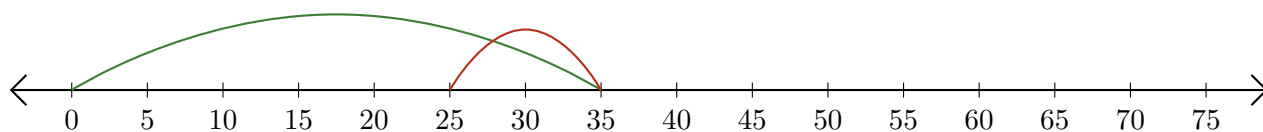
2. $60 - 45 = \underline{15}$



3. $50 + 15 = \underline{65}$



4. $35 - 10 = \underline{25}$



5. $55 + 10 = \underline{65}$

