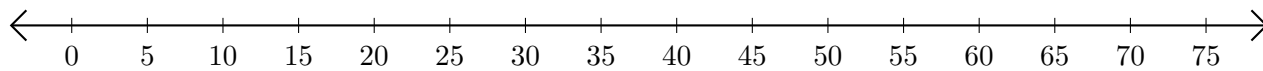


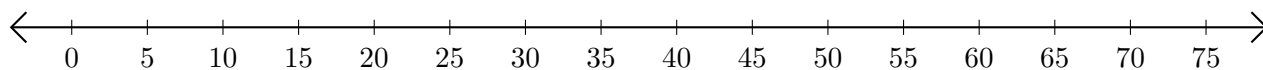
Opérations sur Une Droite Graduée (B)

Utilisez la droite graduée pour calculer chaque somme ou différence.

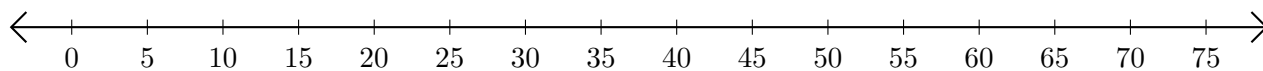
1. $70 + 5 = \underline{\quad}$



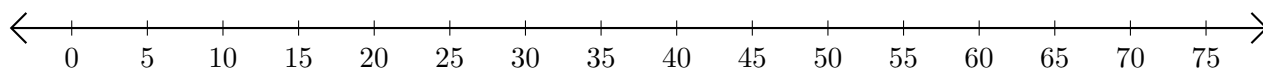
2. $75 - 25 = \underline{\quad}$



3. $60 + 10 = \underline{\quad}$



4. $70 - 40 = \underline{\quad}$



5. $75 - 65 = \underline{\quad}$

