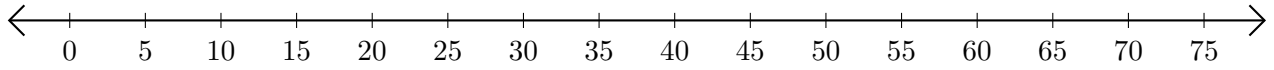


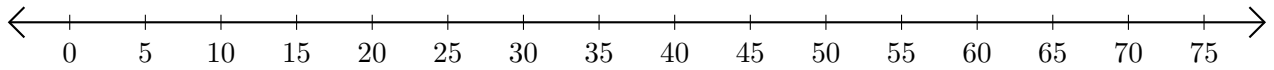
Opérations sur Une Droite Graduée (A)

Utilisez la droite graduée pour calculer chaque somme ou différence.

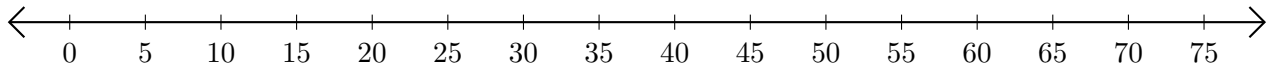
1. $55 + 10 = \underline{\quad}$



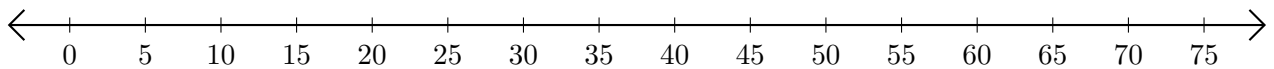
2. $35 - 10 = \underline{\quad}$



3. $15 + 25 = \underline{\quad}$



4. $55 - 45 = \underline{\quad}$



5. $60 + 5 = \underline{\quad}$

