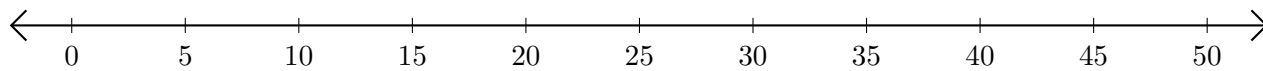


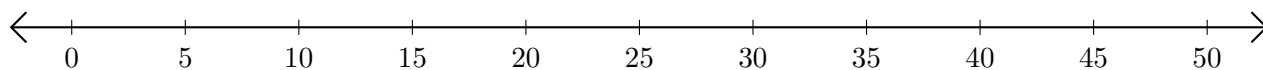
Opérations sur Une Droite Graduée (F)

Utilisez la droite graduée pour calculer chaque somme ou différence.

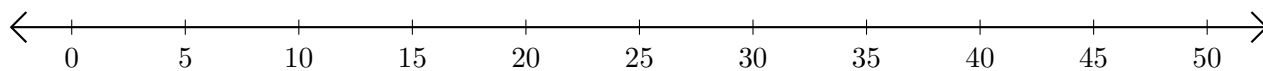
1. $35 + 10 = \underline{\quad}$



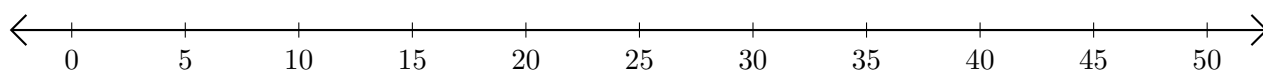
2. $50 - 45 = \underline{\quad}$



3. $10 + 25 = \underline{\quad}$



4. $40 - 25 = \underline{\quad}$



5. $35 - 5 = \underline{\quad}$

